



Teacher Guide—Physical Science Module

Activity 2 — Dissolved Oxygen in an Estuary



Featured NERRS activity:

Narragansett Bay National Estuarine
Research Reserve, Rhode Island

<http://nerrs.noaa.gov/NarragansettBay/welcome.html>

Activity Summary

In this activity, students learn about dissolved oxygen (DO) and its effects on life, with a focus on the chemistry. First, they are introduced to, and analyze data gathered from, water quality sensors in Narragansett Bay National Estuarine Research Reserve (NERR), observing how DO and chlorophyll-a change from the surface to the bottom and considering the relationships between DO and temperature. Then, in the unique environment of Azevedo Pond in the Elkhorn Slough NERR, CA, they analyze DO data and speculate about how hydrodynamics, abiotic factors, and biological processes cause extreme fluctuations in DO in the pond.

3. Understand how photosynthesis, respiration, and decomposition affect dissolved oxygen.
4. Explain the role of these processes in daily or seasonal dissolved oxygen fluctuations in some estuaries.
5. Explain how hypoxia and anoxia occur, using data as evidence, and explain the affect on estuarine animals.

Grade Levels

9-12

Learning Objectives

Students will be able to:

1. Explain the relationships between dissolved oxygen and water depth, chlorophyll-a and water depth, and dissolved oxygen and temperature.
2. Explain how these parameters interact during estuarine processes and in such phenomena as eutrophication, algal blooms, and supersaturation-hypoxia fluctuations.

Teaching Time

3 class sessions (55 minutes) + homework

Organization of the Activity

This activity consists of 2 parts which help deepen understanding of estuarine systems:

Dissolved Oxygen in Narragansett Bay
What's Happening in Azevedo Pond?



Featured NERR Estuaries

- Narragansett Bay National Estuarine Research Reserve, Rhode Island
<http://nerrs.noaa.gov/NarragansettBay/welcome.html>
- Elkhorn Slough National Estuarine Research Reserve, California (Azevedo Pond)
<http://nerrs.noaa.gov/ElkhornSlough/welcome.html>

Background

Students focus on the relationship between dissolved oxygen, plant growth, chlorophyll-a and temperature using SWMP data from monitoring stations in the Narragansett Bay Estuarine Research Reserve. If your students have not studied the processes of photosynthesis or respiration, go over the equations as part of your introduction to the activity. What follows is additional background information on the concepts contained in this activity.

Dissolved Oxygen

To survive, fish, crabs, oysters and other aquatic animals must have sufficient levels of dissolved oxygen (DO) in the water. The amount of dissolved oxygen in an estuary's water is a major factor that contributes to the type and abundance of organisms that can live there.

Oxygen enters the water through two natural processes: (1) diffusion from the atmosphere and (2) photosynthesis by aquatic plants. The mixing of surface waters by wind and waves increases the rate at which oxygen from the air can be dissolved or absorbed into the water.

DO levels are influenced by temperature and salinity. The solubility of oxygen, or its ability to dissolve in water, decreases as the water's temperature and salinity increase. DO levels in an estuary also vary seasonally, with the lowest levels occurring during the late summer months when temperatures are highest.

Bacteria, fungi, and other decomposer organisms reduce DO levels in estuaries because they consume oxygen

while breaking down organic matter.

Oxygen depletion may occur in estuaries when many plants die and decompose, or when wastewater with large amounts of organic material enters the estuary. In some estuaries, large nutrient inputs, typically from wastewater, stimulate algal blooms. When the algae die, they begin to decompose. The process of decomposition depletes the surrounding water of oxygen and, in severe cases, leads to hypoxic (very low oxygen) conditions that kill aquatic animals. Shallow, well-mixed estuaries are less susceptible to this phenomenon because wave action and circulation patterns supply the waters with plentiful oxygen.

Dissolved oxygen is critical for the survival of animals and plants that live in the water. Higher oxygen levels are one indicator of a healthier ecosystem. The more oxygen there is in the water, the healthier the ecosystem is. As the water temperature increases, the amount of oxygen that can dissolve in the water decreases. For example, fresh water at 0°C can contain up to 14.6 mg of oxygen per liter of water, but at 20°C, it can only hold 9.2 mg of oxygen per liter. Thus, seasonal water temperature (and dissolved oxygen) is an important indicator of habitat quality for many estuarine species.

Through a process called photosynthesis, plants remove carbon dioxide (CO₂) from the water and emit oxygen (O₂). Since CO₂ becomes carbonic acid when it dissolves in water, the removal of CO₂ results in a higher pH and the water becomes more alkaline, or basic. When algae naturally begin to increase in estuaries during the spring, pH levels tend to rise. An overabundance of algae (called an algal bloom) may cause pH levels in an estuary to rise significantly, and this can be lethal to aquatic animals.

Excessive plant growth and decay can cause significant increases in nutrients such as nitrogen and phosphorus in the water, a condition known as eutrophication. Eutrophication is sometimes a result of pollution sources such as the release of sewage effluent and run-off from lawn fertilizers into streams or rivers leading to the estu-



ary. Eutrophication generally promotes excessive plant growth and decay, favors certain weedy species over others, and is likely to cause severe reductions in water quality, particularly DO. In aquatic environments, eutrophication may cause algae blooms that disrupt normal functioning of the ecosystem, causing a severe drop in DO that needed for fish and shellfish to survive. The water then becomes cloudy, colored a shade of green, yellow, brown, or red.

DO is measured in milligrams per liter of water. DO percent saturation depends on temperature (and also elevation). Percent Saturation is the amount of oxygen dissolved in the water sample compared to the maximum amount that could be present at the same temperature.

Preparation

- Make copies of the *Student Readings* and *Student Worksheets*.
- Arrange for students to have access to online data either by obtaining a computer projector to present the data in front of the whole class or by arranging for student groups to view the data on individual computers. On the computer(s), bookmark the site: <http://omp.gso.uri.edu/ompweb/doce/virtual/sensors.htm>.
- Download the PowerPoint—*Azevedo Pond* to a computer that can project in front of the class or onto computers the students can access directly.
- Assign *Student Reading—Introduction to Narragansett Bay* and *Student Reading—Dissolved Oxygen in an Estuary* for homework before beginning this activity, if possible.

National Science Education Standards

Content Standard A: Science as Inquiry

- A3. Use technology and mathematics to improve investigations and communications.
- A4. Formulate and revise scientific explanations using logic and evidence.
- A6. Communicate and defend a scientific argument.

Content Standard B: Physical Science

- B2. Structure and properties of matter
- B3. Chemical reactions

Content Standard C: Life Science

- C4. The interdependence of organisms
- C5. Matter, energy, and organization in living systems
- C6. The behavior of organisms

Content Standard F: Science in Personal and Social Perspectives

- F3. Natural Resources
- F4. Environmental quality
- F5. Natural and human-induced hazards
- F6. Science and technology in local, national, and global challenges



Procedure

Part 1 — Dissolved Oxygen in Narragansett Bay

1. Have students read *Student Reading—Introduction to Narragansett Bay* and *Student Reading—Dissolved Oxygen in an Estuary*.
2. Ask the students for their ideas about oxygen and life in estuaries. What conditions are necessary for organisms to survive in an estuary? You can list the responses on the board. How do organisms that live in the water extract oxygen for their use? How does oxygen enter estuary water? Prompt students to apply the concepts they have already studied, such as solubility of gasses, photosynthesis and respiration, and interactions between the atmosphere, hydrosphere, and biosphere.
3. Ask students to identify abiotic factors, such as Earth processes in an estuary, or biotic factors that could affect DO.
4. Introduce students to the Web site <http://omp.gso.uri.edu/ompweb/doee/virtual/sensors.htm> and the interactive tool that allows them to see various water quality sensors at different depths. Explain that they will observe how dissolved oxygen, temperature, and chlorophyll-a change with depth for two different locations in the bay. You can go through the site with students or let them work through the activity in small groups.
5. As a class or in groups, have students complete the *Student Worksheet—Dissolved Oxygen in Narragansett Bay*, collecting and analyzing data from two sites: Pomham Rocks, a shore-based site, and South Prudence, situated further out in the Bay.
6. Discuss results and students responses.

Note: Consider having students read the *Student Reading—Introduction to Azevedo Pond* for homework, as preparation for Part 2.

Materials

Students

- Need to work in a computer lab or with a computer and projector
- Copy of Student Reading 1: Introduction to Narragansett Bay
- Copy of Student Reading 2: Dissolved Oxygen in an Estuary
- Copy of Student Reading 3: Introduction to Azevedo Pond
- Copy of Student Worksheet 1: Dissolved Oxygen in Narragansett Bay
- Copy of Student Worksheet 2: Dissolved Oxygen in Azevedo Pond.

Teachers

- Bookmark the following site in all computers: <http://omp.gso.uri.edu/ompweb/doee/virtual/sensors.htm>.
- Download the power point presentation titled “Azevedo Pond” from the estuaries.gov site. Click on the tab titled Teachers, Physical Science and find the presentation under “Supporting Materials”.

Equipment:

- Computer lab or
- Computer and Projector



Part 2 — What's Happening in Azevedo Pond?

1. Have students read the *Student Reading—Introduction to Azevedo Pond*, project the PowerPoint—*Azevedo Pond*, and go over the list of characteristics
2. Have students complete the *Student Worksheet—Dissolved Oxygen in Azevedo Pond*. Students may need help interpreting the graph, particularly if it is not in color.
3. Discuss results and students responses.

Check for Understanding

- Discuss the following:
 - a. In general, what is the pattern of DO levels in a pond over the period of a single day?
 - b. In general, what is the pattern of chlorophyll-a in the same pond over the period of a single day?
 - c. What causes hypoxic conditions in an estuary?
- Have students compare DO levels at various sites within NERRS. Download or let students download graphs using the System-wide Monitoring Data (SWMP) data to compare DO stability between an area where eutrophication is common (e.g. Childs River, Waquoit Bay NERR) and a well-flushed area (e.g. Menauhant). How are the DO levels different? Explain why differences occur.

Optional Extension Inquiries

1. Use dissolved oxygen probes, if available, to measure DO and consider how it changes over time under various conditions. For example, (1) take measurements of DO from water samples that include algae, (2) expose the samples to direct light for about five days, and then (3) measure DO again. (Samples can be collected from an estuary or created using tap water and Elodea.) Or (1) take measurements of DO from a jar of just tap water and another jar with tap water and chopped green vegetables and (2) monitor the DO in the jars over five days.
2. Analyze dissolved oxygen and chlorophyll-a data from sampling sites on Chesapeake Bay to identify conditions that caused fish kills and crab jubilees in the Bay during the summer of 2003.
http://www.cbf.org/site/PageServer?pagename=resources_facts_deadzone#cause
3. Track recent algal blooms in Chesapeake Bay from the Maryland Department of Natural Resources Eyes on the Bay Site: <http://mddnr.chesapeakebay.net/eyesonthebay/index.cfm>





Teacher Worksheet with Answers

Activity 2: Dissolved Oxygen in Narragansett Bay

National Estuarine Research Reserve

Part 1 — Dissolved Oxygen in Narragansett Bay

Pomham Rocks

Depth (meters)	DO Saturation (%)	DO Concentration (mg/L)	Water Temperature (degrees C)	Chlorophyll (µg/L)
1	165	12.5	22	25
3	120	9.2	21	34
5	110	8.4	20	22
7	80	6.2	19	10
9	40	3.1	19	5
11	20	1.6	19	No reading at this depth

South Prudence

Depth (meters)	DO Saturation (%)	DO Concentration (mg/L)	Water Temperature (degrees C)	Chlorophyll (µg/L)
1	160	11.6	23	12
3	125	9.1	23	22
6	100	7.3	22	15
9	80	6.2	19	11
12	80	6.2	19	9
15	75	5.8	19	No reading at this depth

1a. Why might there be differences in DO concentration at two different locations, at the same depth, within the same estuary?

Answer: DO concentration can be influenced by factors, such as water temperature, turbulence caused by winds, waves, currents, and mixing, all factors that change from site to site.



1b. As depth increases, how does:

- DO concentration change? DO saturation?

Answer: As you go deeper, DO concentration and DO saturation both decrease. (Teacher Note: Oxygen dissolves in estuary water partly by diffusion from the atmosphere. This occurs mainly near the surface, DO is higher there. DO is also generated by turbulence in the water caused by currents, winds and waves and by mixing, which is greater near the surface. DO also decreases with depth because of increasing water pressure. DO is also generated by the photosynthesis of plankton and macroalgae (Seaweed), and plants that grow on the bottom. At greater depths, sunlight for photosynthesis decreases.)

- The temperature of the water?

Answer: As you go deeper, the temperature of the water decreases, though not smoothly. (Teacher Note: Students may become confused by the fact that although water gets colder with depth, DO does not increase with these colder temperature. In these cases of changing depth, other factors must also be considered. Water pressure, which increases with depth, and reduced sunlight, which limits photosynthesis, are much stronger influences on DO than colder water.)

- Chlorophyll amounts?

Answer: As you go deeper, chlorophyll concentration decreases. (Teacher Note: Less sunlight can penetrate the water at those depths. Therefore, less sunlight is available for photosynthesis.)

1c. During which months in 2006 does DO concentration reach its lowest extremes in this estuary?

Answer: July, August, September, October

1d. What are the approximate dates for the three highest recordings of DO concentration as presented on the graph? What is the water temperature on those dates? Record your data in the table below.

Date	DO Concentration (mg/L)	Water Temperature (degrees C)
January 20	12.7	4
March 15	13.7	4
March 30	12.6	6



- 1e. What are the approximate dates for the three lowest recordings of DO concentration as presented on the graph? What is the water temperature on those dates? Record your data in the table below.

Date	DO concentration (mg/L)	Water Temperature (degrees C)
August 1	5.8	26.9
August 30	5.5	21.9
October 1	6.5	19

- 1f. What is the relationship between DO concentration and temperature?

Answer: Generally, there is an inverse relationship. As temperature increases, dissolved oxygen decreases and as temperature decreases, dissolved oxygen increases. Water at colder temperatures can hold more dissolved oxygen.





Teacher Worksheet with Answers

Activity 2: Dissolved Oxygen in Azevedo Pond

Part 2 — What’s Happening in Azevedo Pond?

1. What are the features of Azevedo Pond that could affect dissolved oxygen? List them in the chart below and explain how they could affect dissolved oxygen.

Feature	Affect on Dissolved Oxygen
Shallow	<i>Most of the water will be close to the surface where oxygen will diffuse into the water, and light can probably penetrate the entire water column allowing for photosynthesis and creation of DO. However, light can probably heat the water column thoroughly, and temperatures that are too high will decrease DO.</i>
Restricted water flow	<i>The lack of much water exchange limits DO, because it keeps water from mixing and becoming aerated.</i>
High productivity of plankton	<i>Lots of photosynthesis will produce lots of DO, but if there is an overabundance of plankton, it may produce algal mats, especially if there is an excess of nutrients. When the algal mats die, they will decompose and this will consume oxygen.</i>
Large changes in temperature	<i>Can cause either a large increase of plant growth that increases DO, or a drop in temperature can cause massive die off of plant matter, subsequent decay and lowering of DO.</i>
Bordered by strawberry farm	<i>May receive a high amount of nitrates and phosphates from the fertilizers during rain runoff. These nutrients could cause algae blooms that will produce lots of oxygen, but which will eventually decay, consuming DO.</i>
Lack of tidal flushing	<i>Will mean not much mixing. Also means that nutrients and the algae will remain in the pond for longer periods of time, allowing for photosynthesis of algae blooms and creation of DO, but also decomposition of algal mats and eventual hypoxia. Poor flushing causes thermal stratification, which further keeps water from mixing. Warmer waters closer to the surface may limit production of DO.</i>

2. Look at the graph of DO Saturation and PAR (photosynthetically available radiation—a synonym of visible light) for Azevedo Pond during the week of April 9-16, 2007.

2a. What is the range of DO (orange curves) for this period?

Answer: From a high of about 275% sat to a low of 0% sat.



2b Describe the pattern you see from day to day.

Answer: It steadily rises during daylight hours and spikes at about mid-day. Then it declines from evening until midnight, getting down to zero during the middle of the night.

2c. How does PAR change in relation to DO percentage from day to day?

Answer: PAR changes in the same way as DO throughout the day.

2d. Why do you think DO percentage and PAR vary like this in Azevedo Pond during April 2007? Try to explain in terms of photosynthesis, respiration and the features of the pond that affect dissolved oxygen.

Answer: Because the pond is poorly flushed by the tide, plankton and nutrients remain in the pond for long periods of time. The shallow water gets ample sunlight for algae and plants to photosynthesize throughout the water column, generating an abundance of DO. As PAR increases throughout the day, photosynthesis increases. This generates levels of oxygen that cause the water to be supersaturated, but only during the daylight hours. At night, the abundance of algae and the plants continues to respire, but without photosynthesis to balance the respiration. In darkness, the chlorophyll undergo respiration to the point where most of the oxygen is consumed and the water is hypoxic (the percentage of DO saturation is zero).

3. What percent of each year has Azevedo Pond had hypoxic conditions? How does this compare with other sites?

Answer: Azevedo Pond is the only one of these sites that has had hypoxic conditions every year between 1996 and 2006. Each year, about 15-20% of the year or 1.8-2.4 months (54-72 days) have hypoxic conditions.





Student Reading—1

Activity 2: Introduction to the Narragansett Bay National Estuarine Research Reserve

The Narragansett Bay National Estuarine Research Reserve (NBNERR) is located in the geographic center of Narragansett Bay. The Narragansett Bay watershed drains over 1600 square miles of land and over 60% of the watershed is in Massachusetts. The Bay's watershed is heavily populated and urbanized. Rivers and streams in the watershed feed about 2 billion gallons of fresh water into Narragansett Bay every day. To get a sense of how much water that is think about this; two billion minutes is about 3,800 years!

way to get out to Prudence Island is by boat, and a ferry runs back and forth to the island each day. Only about 150 people choose to live out on Prudence Island year round. They have to rely on the ferry for everything, even getting groceries and supplies back to their homes in the winter. It is a tough way of life, so not many people spend the whole year on the island. In the summer the island becomes a popular vacation destination and as many as 3000 people might be on Prudence during a weekend in the summer.

The Narragansett Bay Research Reserve encompasses roughly 4,400 acres of land and water out to a depth of 18 feet on Prudence, Patience, Hope and Dyer Islands located in the center of Narragansett Bay. Prudence Island is the Reserve's biggest island and is home to the Reserve's headquarters. Approximately 80% of Prudence Island is held in conservation thanks to the Reserve and other local conservation groups. The only

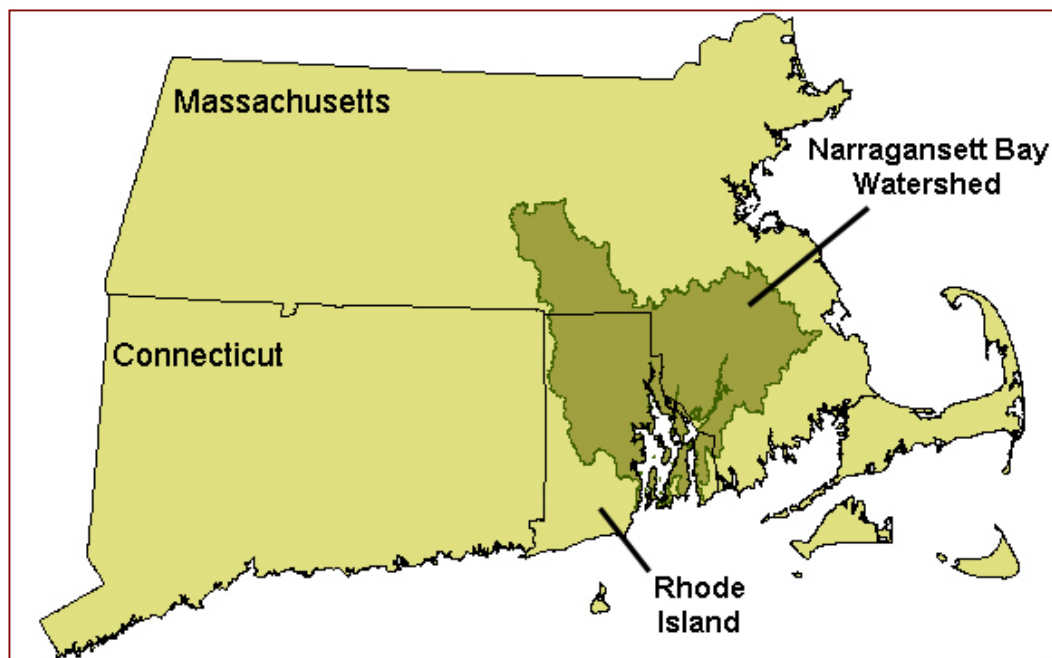


Figure 1 . The ~1600 square mile Narragansett Bay watershed extends up into the State of Massachusetts.





Figure 2 . Prudence, Patience, Hope, and Dyer Islands make up the Narragansett Bay Research Reserve in the center of Narragansett Bay.

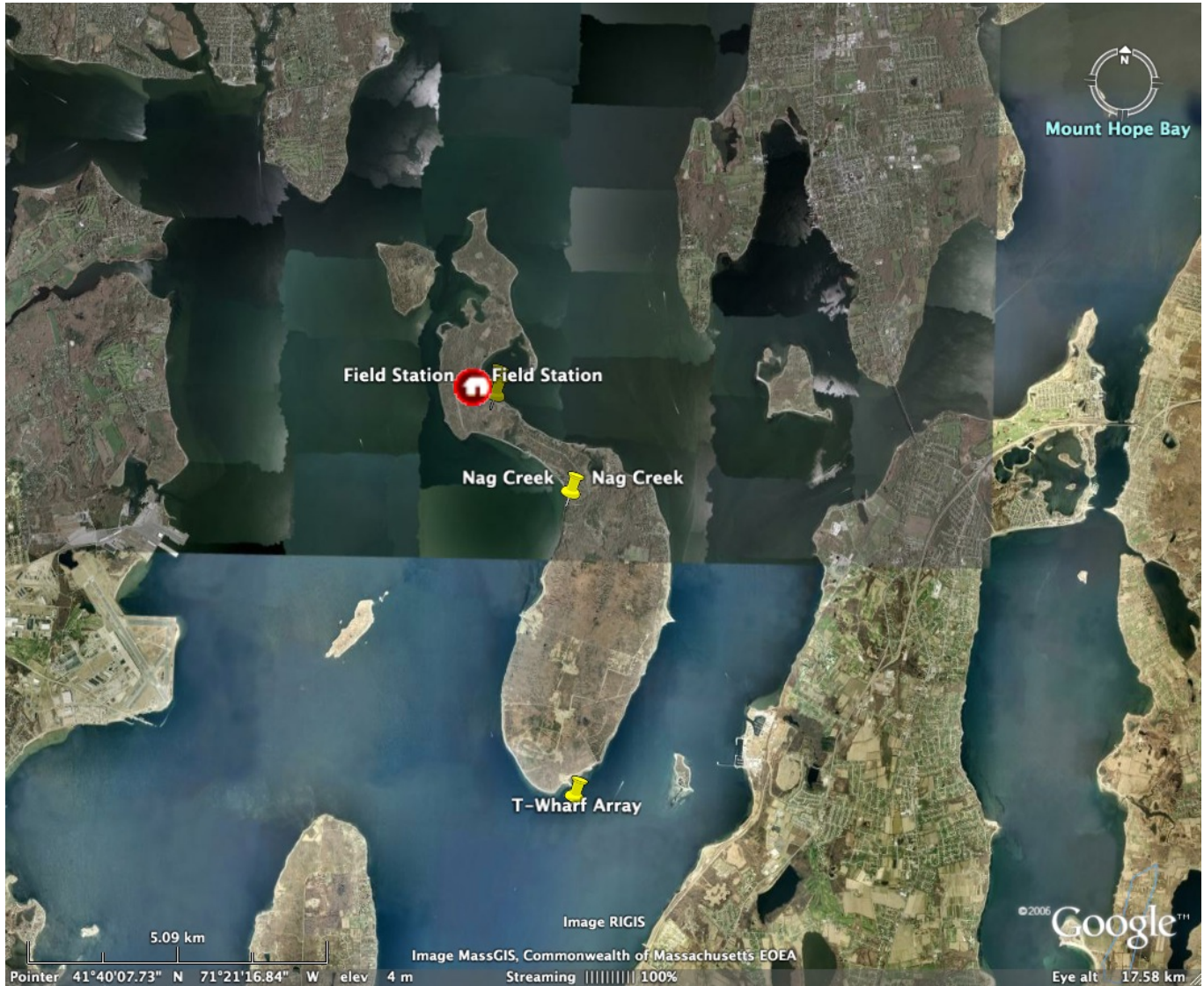


Figure 3 . You will use field and monitoring station data from the sites seen in this satellite view.



Student Reading – 2

Activity 2: Dissolved Oxygen in an Estuary

Dissolved Oxygen in an Estuary

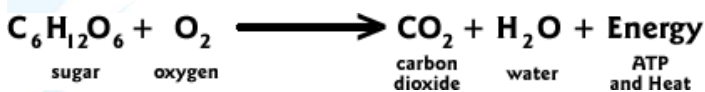
Aerobic aquatic organisms such as zooplankton, invertebrates and fish require sufficient levels of dissolved oxygen (DO) to survive. The amount of DO in the water is a factor in determining the species and abundance of organisms that can live in an estuary.

Oxygen is supplied to estuarine waters through two natural processes: (a) diffusion of atmospheric oxygen into the water and (b) photosynthesis by phytoplankton, aquatic seaweeds and seagrasses. Mixing of surface waters by wind and waves also increases the rate of absorption of atmospheric oxygen into the water.

Levels of DO are influenced by temperature and salinity. The solubility of oxygen, or its ability to dissolve in water, decreases with increasing temperature and/or increasing salinity. DO levels in an estuary vary seasonally, with the lowest levels occurring during the late summer months when temperatures climb to their highest levels of the year.

Oxygen is removed from the water by aerobic respiration and bacterial decomposition. **Respiration** is a process in which animals and plants take up oxygen from the water and produce carbon dioxide.

Respiration is the release of energy from food in the presence of oxygen. Like photosynthesis, it is a sequence of chemical reactions that can be summarized in a shorthand chemical equation:



Respiration occurs all the time, while photosynthetic production of oxygen by plants occurs only during daylight hours. As a result, dissolved oxygen levels in an estuary may vary widely because of differences in

the amount of oxygen produced by plants. Bacteria, fungi, and other organisms affect DO levels in an estuary because they consume oxygen while breaking down organic matter produced in the estuary or delivered from the uplands by stream flow and runoff. These decomposers consume oxygen in the process of gaining energy through the breaking of chemical bonds in organic matter.

Oxygen depletion may occur in an estuary when many plants die and decompose, or when runoff or poorly treated wastewater containing large amounts of organic matter enters the estuary. In some estuaries, large nutrient inputs, normally from sewage inputs, stimulate phytoplankton blooms. When these organisms die, their bodies fall to the bottom of the estuary and begin to decompose. The decomposition process depletes the surrounding water of oxygen and, in severe cases, may lead to **anoxic** (very low oxygen) conditions that kill bottom-dwelling organisms. Shallow, well-mixed estuaries are less susceptible to this phenomenon because wave action and circulation patterns can easily supply the waters with oxygen.

Dissolved Oxygen and Life

All life in an estuary depends on oxygen in sufficient amounts. DO can increase and decrease suddenly, causing a struggle for survival for many animal and plant species.

Cold water can hold more dissolved oxygen than warm water and fresh water can hold more dissolved oxygen than salt water. So the warmer and saltier the water, the less dissolved oxygen there can be. The maximum amount of dissolved oxygen that the water can hold is called the saturation value. Dissolved oxygen measurements are given as a percent of saturation (%) or in units of milligrams



per liter (mg/l).

If you consider the equation for **photosynthesis**, you can see why an explosion of plant growth (see algal blooms below) can cause water to become over saturated with oxygen. A huge amount of plant growth releases so much oxygen that the water becomes supersaturated (120%).



When the opposite is true, when water has very low levels of oxygen, the condition is called **hypoxia**. DO levels of less than 28% saturation or concentrations between .5 and 2 mg/L are considered lethal to most aquatic life. Hypoxia is often caused by excessive growth of algae, called “algal blooms.” Although these blooms may result from natural conditions, they are also linked to excess nutrients that enter estuaries from human sources, such as: point source discharges from sewage and industry and septic tanks; wastewater treatment plants; exhaust from cars; emissions from industry; fertilizers from lawns, golf courses and farms, as well as from animal waste. These nutrients enter estuaries directly from point sources or they are transported to estuaries by stream flows, rain, leaching, groundwater, and storm water. The influx of high nutrient levels causes excessive growth of algae. When algae dies, it sinks to the bottom, where it is decomposed by bacteria in the sediments.

This process removes oxygen from the water. As bacteria decompose more algae, more oxygen is consumed. If too much oxygen is removed from deep waters, the small organisms that fish and crabs eat die off. Fish and other predators may die themselves or move to other areas in search of more oxygen. **Anoxia** refers to water that has been completely depleted of oxygen. Large areas of estuaries where organisms have died off or left for lack of sufficient oxygen are called **dead zones**. Some estuaries experience dead zones regularly. Weak tidal flushing, shallow water depth, and stratification between warmer surface water and colder bottom water may also lower DO concentrations. All

of these conditions exist in Azevedo Pond.

Algal blooms can be detected by measurements of chlorophyll-a. Chlorophyll-a is a pigment in phytoplankton that is involved in photosynthesis. Concentrations of chlorophyll-a are measures of phytoplankton abundance. Concentrations measured are measured in units of μ/L. The presence of chlorophyll-a indicates an abundance of algae, which initially increases levels of DO. But eventually the algae decay, driving DO levels down again.

Some estuaries, like Azevedo Pond, have extreme fluctuations in dissolved oxygen from day to night regularly.




Figure 4. Minimum amount of DO needed for species to survive. (Credit: Chesapeake Bay Program. URL: <http://www.chesapeakebay.net/dissolvedoxygen.aspx?menuitem=14654>. Accessed: 2008-08-06.



These estuaries may go through weeks of daily cycles that are marked by supersaturation in the day and hypoxia at night. Supersaturation can occur during the daytime when algae on the surface photosynthesizes, producing an overabundance of oxygen. This supersaturation of DO during daylight can be followed by hypoxia during the night. In darkness, phytoplankton and plants no longer have the light they need to photosynthesize, but they do continue the process of respiration, which consumes oxygen.

- Adapted from the National Estuarine Research Reserve System website. URL:<http://www.nerrs.noaa.gov/Monitoring/WaterOxygen.html>. Accessed: 2008-08-08.

(Archived by WebCite® at <http://www.webcitation.org/5Zv9dN1Z6>)





Student Worksheet—1

Activity 2: Dissolved Oxygen in Narragansett Bay

Student Name: _____

1. Open the Web site: <<http://omp.gso.uri.edu/ompweb/doee/virtual/sensors.htm>>.
2. Read the description for Pomham Rocks.
3. Click on the star labeled Pomham Rocks and then click on “Go to Water Reading Sensors.”
4. Record DO Saturation, DO Concentration, Water Temperature, and Chlorophyll at each depth for Pomham Rocks.

Depth (meters)	DO Saturation (%)	DO Concentration (mg/L)	Water Temperature (degrees C)	Chlorophyll (µg/L)



5. Repeat these steps for the South Prudence site.

Depth (meters)	DO Saturation (%)	DO Concentration (mg/L)	Water Temperature (degrees C)	Chlorophyll (µg/L)

6. Examine your data for patterns and relationships.

7. Compare the graphs of DO Concentration and Temperature in 2006 near South Prudence, RI.

8. Use your tables and these graphs to answer the Questions.



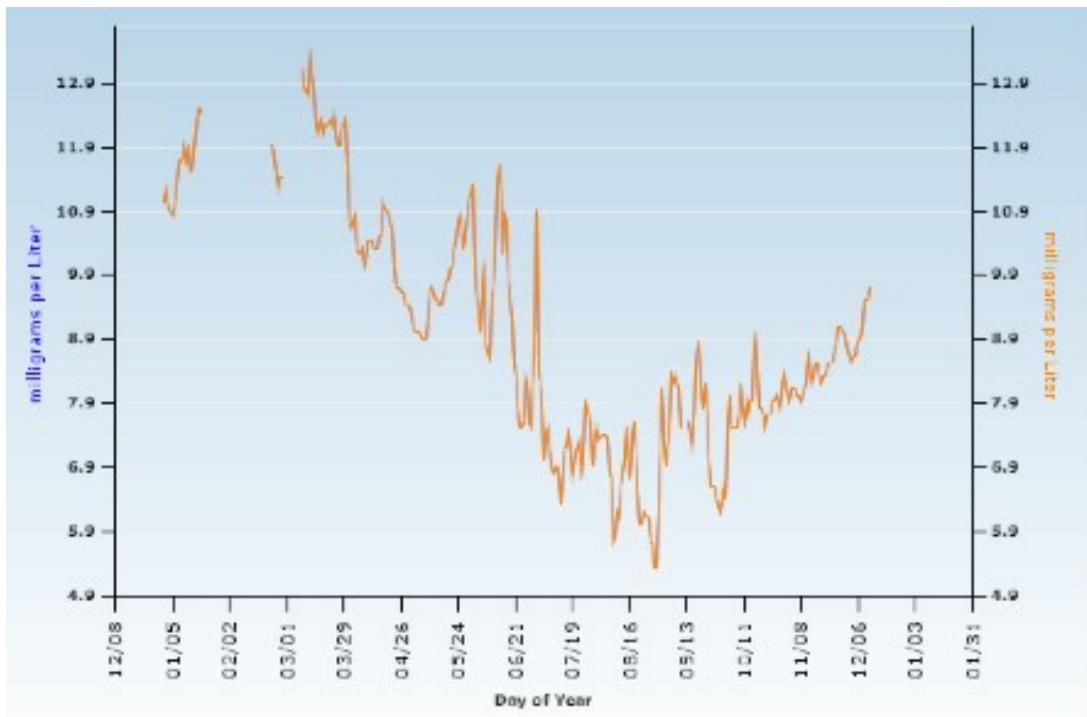


Figure 5. Daily DO: Narragansett Bay NERR

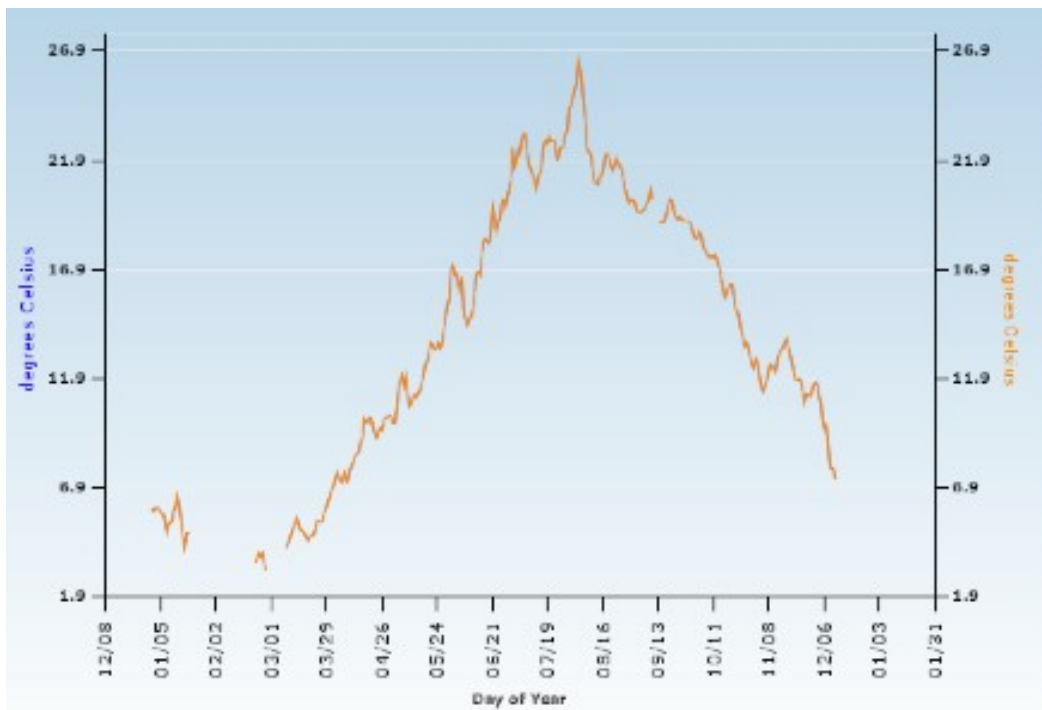


Figure 6. Daily Temperature: Narragansett Bay NERR

Questions

- 1a. Why might there be differences in DO concentration at two different locations, at the same depth, within the same estuary?
- 1b. As depth increases, how does
- DO concentration change?
 - DO saturation?
 - The temperature of the water?
 - Chlorophyll amounts?
- 1c. During which months in 2006 does DO concentration reach its lowest extremes in this estuary?
- 1d. What are the approximate dates for the three highest recordings of DO concentration as presented on the graph? What is the water temperature on those dates? Record your data in the table below.



Date	DO Concentration (mg/L)	Water Temperature (degrees C)

1e. What are the approximate dates for the three lowest recordings of DO concentration as presented on the graph? What is the water temperature on those dates? Record your data in the table below.

Date	DO concentration (mg/L)	Water Temperature (degrees C)

1f. What is the relationship between DO concentration and temperature?



Student Reading – 3

Activity 2: Introduction to Azevedo Pond

Azevedo Pond is a small tidal pond located along the shore in the northern part of the Elkhorn Slough National Estuarine Research Reserve in California. Elkhorn Slough is one of the relatively few coastal wetlands remaining in California. The main channel of the slough, which winds inland nearly seven miles, is flanked by a broad salt marsh.

The reserve lands also include oak woodlands, grasslands and freshwater ponds that provide essential coastal habitats that support a great diversity of native organisms and migratory animals.

More than 400 species of invertebrates, 80 species of fish and 200 species of birds have been identified in Elkhorn Slough. The channels and tidal creeks of the slough are nurseries for many species of fish.

Azevedo Pond is characterized by:

- Restricted water flow: It has only a partial tidal connection to the estuary, so water in the pond does not get flushed out well and often remains in the pond for a long time.
- Azevedo Pond is only flushed with Upper Elkhorn Slough water when the tide height is greater than 1.2 m. The lack of tidal flushing means that the water can get separated into distinct warmer and cooler layers .
- The pond is surrounded by a strawberry farm. The only groundwater and surface runoff input the pond receives is from the strawberry farm during rainfall.
- Shallow depth: It is less than 1.5 m deep.
- High productivity by phytoplankton.
- Large daily temperature changes that occur periodically.
- The pond produces thick mats of algae during the summer and fall months.



Figure 7. A satellite view of Elkhorn Slough NERR and Azevedo Pond



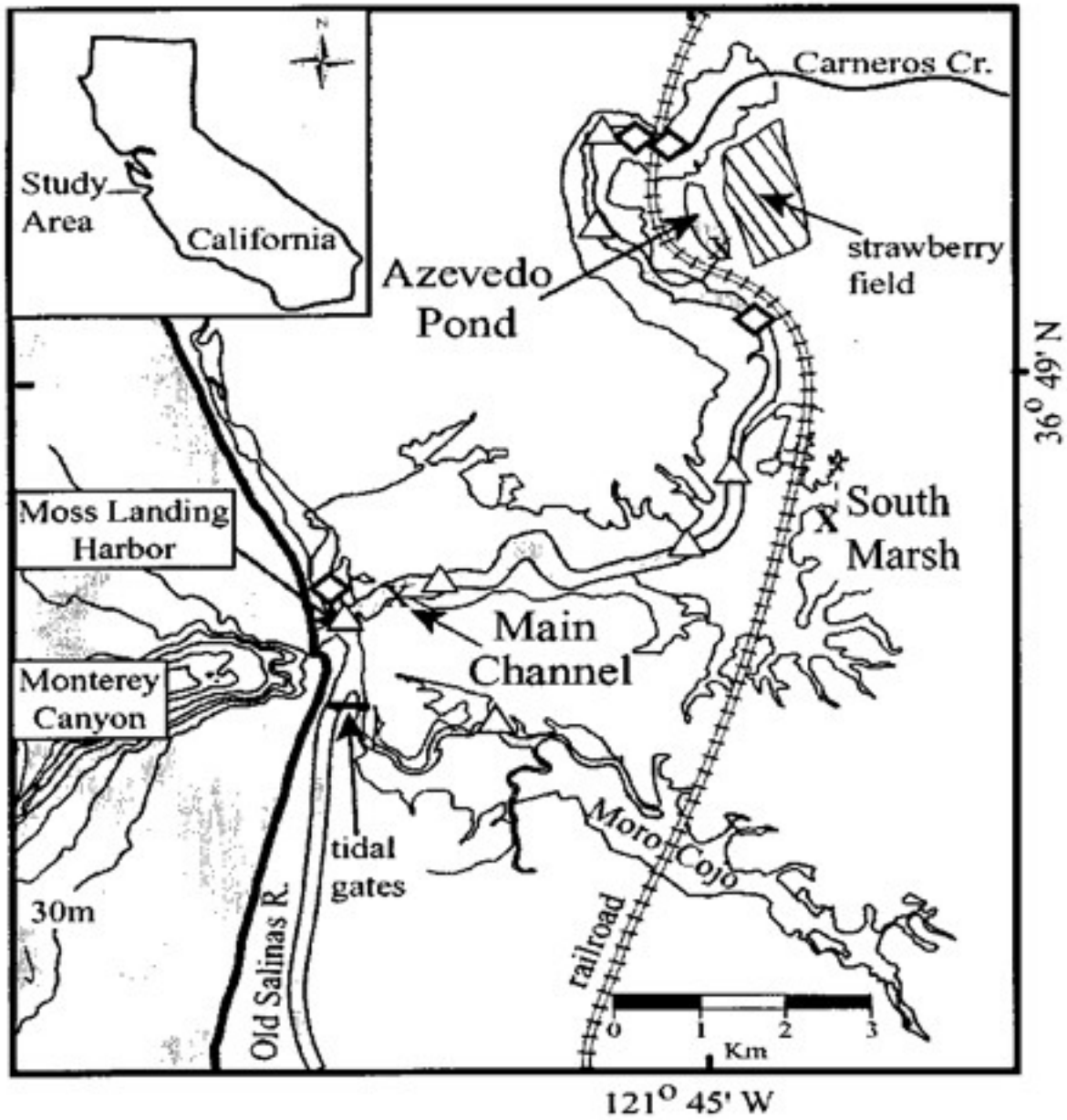


Figure 8. Map of Azevedo Pond and the Surrounding Area



Student Worksheet

Activity 2: Dissolved Oxygen in Azevedo Pond

Student Name: _____

1. What are the features of Azevedo Pond that could affect dissolved oxygen? List them in the chart below and explain how they could affect dissolved oxygen.

Feature	Affect on Dissolved Oxygen
Shallow	
Restricted water flow	
High productivity of plankton	
Large changes in temperature	
Bordered by strawberry farm	
Lack of tidal flushing	



2. Look at the graph of DO Saturation and PAR (photosynthetically available radiation—a synonym of visible light) for Azevedo Pond during the week of April 9-16, 2007.

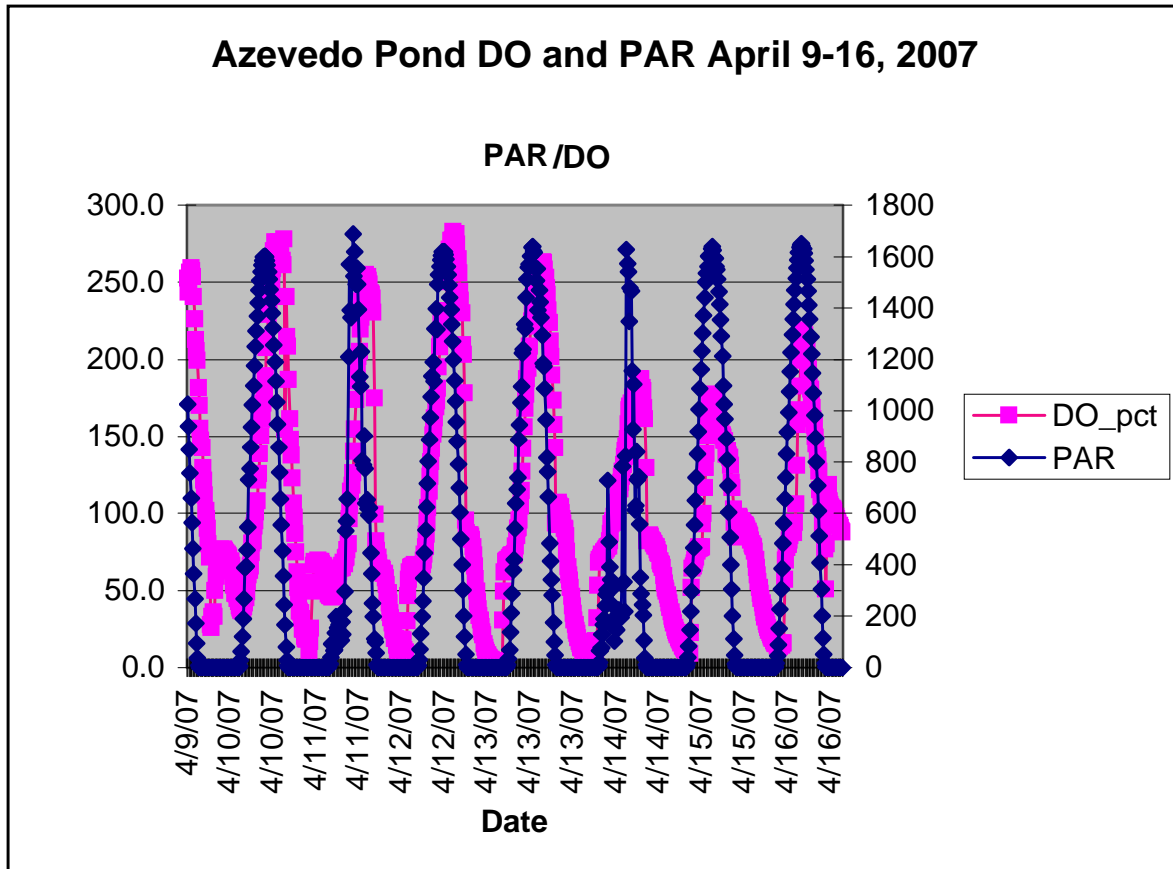


Figure 9. Azevedo Pond Dissolved Oxygen and Photosynthetically Available Radiation, April 9-16, 2007

- 2a. What is the range of DO (dotted-line) for this period?

2b. Describe the pattern you see from day to day between DO and PAR.

2c. How does PAR change in relation to DO percentage from day to day?

2d. Why do you think DO percentage and PAR vary like this in Azevedo Pond during April 2007. Try to explain in terms of photosynthesis, respiration and the features of the pond that affect dissolved oxygen.



Look at the graph of Elkhorn Slough that shows the frequency of hypoxic events (what percent of the year) in Azevedo Pond and three other sites within the Slough. (Note: Hypoxia is defined as a DO saturation level of less than 28%.)

Elkhorn Slough Hypoxia Events

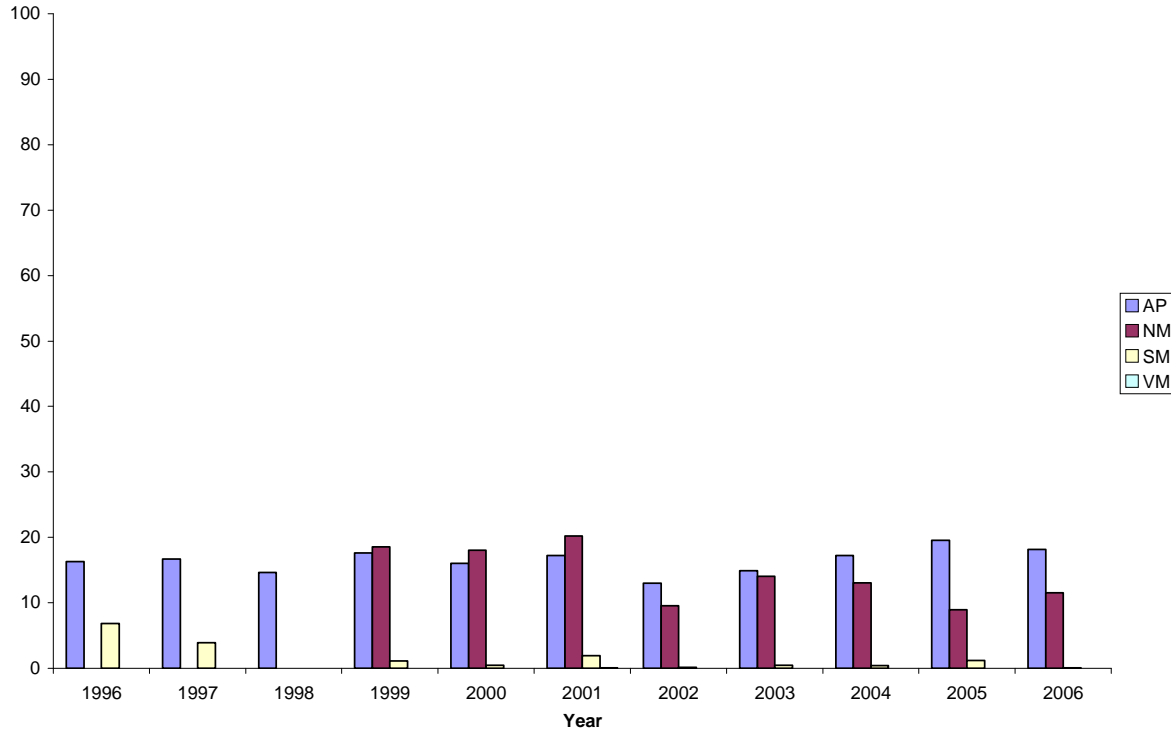


Figure 10 — Frequency of Anoxia in Azevedo Pond (first column in each series) compared to three other sites in Elkhorn Slough

3. What percent of each year has Azevedo Pond had hypoxic conditions? How does this compare with other sites?