




## Teacher Guide—Physical Science Module

### Activity 1 — Chemistry in an Estuary



Featured NERRS activity:

[Delaware NERR](http://www.nerrs.noaa.gov/Delaware/welcome.html)

<http://www.nerrs.noaa.gov/Delaware/welcome.html>

### Activity Summary

In this activity, students investigate water quality parameters to study the nature of, and the cyclical changes inherent in, the chemistry of estuarine water. Students study key water quality factors at several stations in a single reserve over time—current, daily, and yearly time scales. Students also compare water quality values over a yearly time scale in three different estuaries within NOAA’s National Estuarine Research Reserve System (NERR) —South Slough NERR, Oregon; Delaware NERR; and Old Woman Creek NERR, Ohio. Then students take water quality measurements at a site near them and compare their data to the water in the three geographically diverse NERR estuarine environments.

3. Name and describe four basic water quality monitoring parameters—pH, dissolved oxygen, salinity (conductivity) and temperature.
4. Explain how change in chemical water quality is evidence for change in the estuary system.

### Grade Levels

9-12

### Teaching Time

5 class sessions (55 minutes) + homework

### Learning Objectives

Students will be able to:

1. Describe how different chemical and physical properties affect and interact within an estuarine environment.
2. Explain how analyzing chemical and physical water quality data can lead to an understanding of estuary dynamics.

### Organization of the Activity

This activity consists of 5 parts which help deepen understanding of estuarine systems:

1. What is an Estuary?
2. Investigating Water Quality in an Estuary
3. Investigating Water Quality Over a Day
4. Investigating Water Quality Over a Year
5. Comparing Water Quality Data Between Two Different Estuarine Environments



## Featured NERR Estuaries

- South Slough National Estuarine Research Reserve, Oregon  
<http://www.nerrs.noaa.gov/SouthSlough/welcome.html>
- Delaware National Estuarine Research Reserve, Delaware  
<http://www.nerrs.noaa.gov/Delaware/welcome.html>
- Old Woman Creek National Estuarine Research Reserve, Ohio  
<http://www.nerrs.noaa.gov/OldWomanCreek>

## Background

This activity introduces students to the complex chemistry of estuarine water. Students investigate how chemical and physical (temperature is not chemical but physical) water quality factors—pH, temperature, dissolved oxygen, and salinity—change and interact over varying time scales in three estuaries—one on the west coast (South Slough NERR), one on the east coast (Delaware NERR), and one in the Great Lakes region (Old Woman Creek NERR). The three estuaries have very different physical and chemical characteristics, primarily because of their respective proximity to the ocean. Two of the estuaries are near oceans and one is a freshwater estuary. Students analyze data from the System-Wide Monitoring Program data website in several parts of the activity. You may wish to add to the discussion and definition of these following chemical factors when students view the gauge data.

### pH

pH is a measure of how acidic or basic a solution is. The pH scale ranges from 0 to 14. Solutions with a pH of less than 7 are acidic, and those with a pH greater than 7 are basic (or alkaline).

Knowledge of pH is important because most aquatic organisms are adapted to live in solutions with a pH between 5.0 and 9.0. The pH in an estuary tends to remain relatively constant because the chemical components in seawater resist large changes to pH. Biological activity, however, may significantly alter pH in the freshwater portions of the estuary.

pH is actually a measure of the amount of hydrogen ions in solution. In fact, some people think of pH as being the “power of hydrogen.” A lower pH indicates that there are more free hydrogen ions in the water, which creates acidic conditions, and a higher pH indicates there are less free hydrogen ions, which creates basic conditions. pH is equal to the negative logarithm of the hydrogen ion activity, meaning that the hydrogen ion concentration changes tenfold for each number change in pH unit.

Through a process called photosynthesis, plants remove carbon dioxide (CO<sub>2</sub>) from the water and emit oxygen (O<sub>2</sub>). Since CO<sub>2</sub> becomes carbonic acid when it dissolves in water, the removal of CO<sub>2</sub> results in a higher pH, and the water becomes more alkaline, or basic. When algae naturally begin to increase in estuaries, as they may do when days lengthen and the water temperature rises in spring, pH levels tend to rise. Respiration, on the other hand, releases CO<sub>2</sub> into the water, resulting in a lower pH, so pH levels may drop during the summer nights when the algae aren’t photosynthesizing, but their respiration continues.

All aquatic organisms have a pH range to which they are adapted. Outside of this range, critical biological processes may be disrupted, leading to stress and death. Most organisms cannot live below a pH of 5 or above a pH of 9. pH is also used to monitor safe water conditions. Once the background range of pH has been established, a rise or fall in pH may indicate the release of a chemical pollutant, or an increase in acid rain. Additionally, pH affects the solubility, biological availability, and toxicity of many substances. For example, most metals are more soluble, and often more toxic, at lower pH values.

### Temperature

Just knowing the temperature of the water in an estuary can give us a pretty good idea of how healthy it is. One important thing we can tell from water temperature is how much oxygen can be dissolved into the water.



Dissolved oxygen is critical for the survival of animals and plants that live in the water. As the water temperature increases, the amount of oxygen that can dissolve in the water decreases. For example, 100% saturated fresh water at 0°C contains 14.6 mg of oxygen per liter of water, but at 20°C, it can only hold 9.2 mg of oxygen per liter. Because dissolved oxygen is critical for survival, seasonal water temperature (and dissolved oxygen) is an important indicator of habitat quality for many estuarine species.

The temperature of the water also tells us what types of plants and animals are able to live in the estuary. All plants and animals have a range of temperatures in which they thrive and reproduce. For instance, salmon will only breed at temperatures below 18°F. If the water in the estuary is outside the normal seasonal temperature range in which most estuarine organisms can comfortably live, it is probably an indication that something is adversely affecting the health of the estuary. Differences in water temperature cause the formation of distinct, non-mixing layers in water, otherwise known as stratification because the density of water changes with temperature. This stratification leads to chemically and biologically different regions in water.

### Dissolved Oxygen

To survive, fish, crabs, oysters and other aquatic animals must have sufficient levels of dissolved oxygen (DO) in the water. The amount of dissolved oxygen in an estuary's water is the major factor that determines the type and abundance of organisms that can live there.

Oxygen enters the water through two natural processes: (1) diffusion from the atmosphere and (2) photosynthesis by aquatic plants. The mixing of surface waters by wind and waves increases the rate at which oxygen from the air can be dissolved or absorbed into the water.

DO levels are influenced by temperature and salinity. The solubility of oxygen, or its ability to dissolve in water, decreases as the water's temperature and salinity increase. Therefore, DO levels in an estuary can also vary seasonally, with the lowest levels occurring during

## National Science Education Standards

### Content Standard A: Science as Inquiry

- A3. Use technology and mathematics to improve investigations and communications.
- A4. Formulate and revise scientific explanations using logic and evidence.
- A6. Communicate and defend a scientific argument.

### Content Standard B: Physical Science

- B2. Structure and properties of matter
- B3. Chemical reactions

### Content Standard F: Science in Personal and Social Perspectives

- F4. Environmental quality
- F5. Natural and human-induced hazards

the late summer months when temperatures are highest.

Bacteria, fungi, and other decomposer organisms can reduce DO levels in estuaries because they consume oxygen while breaking down organic matter. Oxygen depletion may occur in estuaries when many plants die and decompose, or when wastewater with large amounts of organic material enters the estuary. In some estuaries, large nutrient inputs, typically from wastewater, stimulate algal blooms. When the algae die, they begin to decompose. The process of decomposition depletes the surrounding water of oxygen and, in severe cases, leads to hypoxic (very low oxygen) conditions that can kill aquatic animals. Shallow, well-mixed estuaries are less susceptible to this phenomenon because wave action and circulation patterns supply the waters with plentiful oxygen.

### Salinity and Conductivity

Under laboratory conditions, pure water contains only oxygen and hydrogen atoms, but in the real world, many substances, like salt, are dissolved in water. Salinity is the



concentration of salt in water, usually measured in parts per thousand (ppt). The salinity of seawater in the open ocean is remarkably constant between 30 and 35 ppt. Salinity in an estuary varies according to one's location in the estuary, daily and storm-driven tides, and the volume of fresh water flowing into the estuary.

Salinity and conductivity are closely related. Both measure the water's ability to conduct electricity, which is a surrogate measure estimating the quantity of salts dissolved in the water. Conductivity is a more sensitive measure (parts per million or less) than salinity (parts per thousand or greater). Pure water is a very poor conductor of electrical current, but salts, such as sodium, calcium, magnesium, and chloride, dissolved in the water are in ionic (charged) form and conduct electrical current. Conductivity, which is the opposite of resistance, measures the ability of water to conduct current. A higher conductivity indicates less resistance, and means that electrical current can flow more easily through the solution.

In saltwater estuaries, salinity and conductivity levels are generally highest near the mouth of a river where ocean

water enters, and lowest upstream where freshwater flows in. Actual salinities vary throughout the tidal cycle, however, because as the tide rises more ocean water enters the estuary. In saltwater estuaries, salinity and conductivity typically decline in the spring when snowmelt and rain increase the freshwater flow from streams and groundwater. In freshwater estuaries, the salinity and conductivity are much lower than levels found in saltwater estuaries. The pattern of salinity (or conductivity) is normally the reverse of that found in saltwater estuaries. The waters of the Great Lakes have a lower salinity than the streams and rivers flowing into them. Lake water intrusion due to storm surges or seiches results in lower salinity near the mouth of the estuary. During storms and the resulting runoff, both salinity and conductivity levels usually fall as rainwater and the resulting surface runoff are very low in salts. Although this decrease is measurable in freshwater estuaries, it does not have the same ecological impact that it would in a marine estuary. Salinity and conductivity are frequently higher during the summer when higher temperatures increase levels of evaporation in the estuary.

Conductivity and salinity are dependent on many

## Materials

### Students

- Need to work in a computer lab or with a computer and projector
- Copy of Student Reading 1: A Tale of Three Estuaries
- Copy of Student Reading 2: Chemistry in an Estuary
- Copy of Student Worksheet 1: Chemistry in an Estuary
- Copy of Student Data Sheet 1: Chemistry in an Estuary

### Teachers

- Download [Google Earth](http://earth.google.com/) <<http://earth.google.com/>>.
- Bookmark the *Monitoring Tutorial* presentation found in the estuaries.gov site, select the Teachers tab, Classroom Activities and then choose "Monitoring Tutorial". For quick access go to: <http://www.estuaries.gov/estuaries101/ScienceData/Default.aspx?ID=156>

Please read the instructions to download this presentation. It is a large size, please be patient downloading it. Fast internet connections are preferable.

- Water source (preferably from an estuary) with algae
- Digital camera

#### Equipment:

- Computer lab or
- Computer and Projector



factors, including geology, precipitation, surface runoff, and evaporation. Conductivity, because it is a much more sensitive measurement, is also very temperature dependent. It increases as water temperature increases because water becomes less viscous and ions can move more easily at higher temperatures. Because of this, most reports of conductivity reference specific conductivity. Specific conductivity adjusts the conductivity reading to what it would be if the water were 25°C. This is important for comparing conductivities from waters with different temperatures.

Environmental factors that increase conductivity and salinity include: increased temperature, fertilizers from agriculture, sewage, road runoff containing automobile fluids and de-icing salts, and a local geology high in soluble minerals, such as carbonates. Conductivity and salinity also increase due to evaporation. On warm days, the evaporation of water concentrates the ions that remain behind, resulting in water with higher conductivity and salinity. Often, small diurnal fluctuations in conductivity and salinity are seen as a result of evaporation during the day and condensation and groundwater recharge at night. In saltwater estuaries, the influx of ocean water due to rising tides increases salinity and conductivity within the estuary.

Estuarine organisms have different tolerances and responses to salinity changes. Many bottom-dwelling animals, like oysters and crabs, can tolerate some change in salinity, but salinities outside an acceptable range will negatively affect their growth, reproduction, and ultimately, their survival.

Salinity also affects chemical conditions within the estuary, particularly levels of dissolved oxygen in the water. The amount of oxygen that can dissolve in water, or solubility, decreases as salinity increases. The solubility of oxygen in seawater is about 20 percent less than it is in fresh water at the same temperature.

(Text adapted from the *Estuaries Tutorial*, NOAA Ocean Service Education. URL: [http://oceanservice.noaa.gov/education/kits/estuaries/estuaries10\\_monitoring.html](http://oceanservice.noaa.gov/education/kits/estuaries/estuaries10_monitoring.html). Accessed: 2008-08-05. (Archived by WebCite® at <http://www.webcitation.org/5ZrNiZ0UA>)

## Google Earth

This activity *requires* the use of Google Earth. If students have computer access, the use of [Google Earth](http://earth.google.com/) (<http://earth.google.com/>) can help them develop spatial skills.

Find Tutorial “*Using Google Earth to Explore Estuaries*” in [estuaries.gov](http://estuaries.gov), click under Teachers, Tips/Tutorials.



## Google Earth

This activity *requires* the use of Google Earth. If students have computer access, the use of [Google Earth](http://earth.google.com/) (<http://earth.google.com/>) can help them develop spatial skills.

Find Tutorial “*Using Google Earth to Explore Estuaries*” in [estuaries.gov](http://estuaries.gov), click under Teachers, Classroom Activities and find the tutorial.

## Preparation

- Download the *Monitoring Tutorial* presentation, and preview all parts of that presentation. Notice that the word “queues” in orange are valuable extensions of basic concepts. Find instructions on how to access this presentation in the “Materials” section of this Teacher Guide.
- Download Google Earth, if you haven’t already done so, and install it on your classroom computer (s) or computer lab machines <<http://earth.google.com/>>. (To find a Find Tutorial “*Using Google Earth to Explore Estuaries*”, please visit the [estuaries.gov](http://estuaries.gov) site, click under Teachers, Classroom Activities and find the tutorial.
- In Google Earth, locate the South Slough NERR, Old Woman Creek NERR, and the Delaware NERR



in case you want to project maps of these sites for students.

- Find a local site (pond, lake, stream, river, or estuary) that you can use for students to obtain their own water quality data for DO (if possible), temperature, pH, and salinity or conductivity.
- Make copies of the *Student Reading—Tale of Three Estuaries*, *Student Reading—Chemistry in an Estuary*, *Student Worksheet—Chemistry in an Estuary*, and *Student Data Sheet—Chemistry in an Estuary*. The *Student Data Sheet* can also be projected in front of the class.

## Procedure

### Part 1 — What is an Estuary?

1. Ask students if they know what an estuary is. What makes an estuary different than a lake or the ocean? Accept all answers and begin the Old Woman Creek slide show on your classroom computer projector system.
2. Review the explanation about the NERRS System-wide Monitoring Program (SMWP) and Water Quality sections of the presentation. You may fast forward through water qualities not addressed in this activity, or you may choose to have students view all the parameters. Allow students a little time to take notes on what they observe.
3. Have students complete Part 1 of the *Student Worksheet—Chemistry in an Estuary*.
4. Discuss what would cause the water in an estuary to change over a period of a day, a season, or a year. (*Changes in stream flow, tides, weather events such as heavy rains and storms, seasonal temperature changes, etc.*). List the factors on the board.
5. Ask students to think about the nature of water in an estuary. What things could they measure about

the estuary water to quantify the changes in the estuarine system? In this activity, we have chosen to study pH, dissolved oxygen, salinity, and temperature. Students may also mention other parameters such as nutrients (nitrates, nitrites, phosphates) or turbidity/water clarity.

6. Note: Consider having students read the *Student Reading—A Tale of Three Estuaries* and *Student Reading—Chemistry of an Estuary* as homework in preparation for Part 2 and beyond.

### Part 2 — Investigating Water Quality in an Estuary

7. Have students read the *Student Reading—A Tale of Three Estuaries* and *Student Reading—Chemistry of an Estuary*.
8. Project an image of the South Slough NERR and point out the monitoring station—Charleston Bridge. This image also appears on the *Student Worksheet*.
9. If possible, use Google Earth or allow students to use Google Earth to explore the region around the Slough NERR.
10. Have students complete Part 2 of the *Student Worksheet—Chemistry in an Estuary*, using the data from the *Student Data Sheet* or online.
11. Discuss the tasks and questions from this Part.

### Part 3 — Investigating Water Quality Over a Day

12. Have students complete Part 3 of the *Student Worksheet—Chemistry in an Estuary*. You may need to help students grapple with the unequal axes that result from downloading SWMP data. Go over an example of how to find a range if necessary. An example of range: the high water temperature is 20° C and the low water temperature is 12° C the range would be  $20^{\circ} - 12^{\circ} = 8^{\circ} \text{ C}$ .



13. Discuss the questions from Part 3.

#### Part 4 — Investigating Water Quality Over a Year

14. Have students complete Part 4 of the *Student Worksheet—Chemistry in an Estuary*.

15. Discuss the questions from Part 4.

#### Part 5 — Comparing Water Quality Data Between Three Different Estuarine Environments

16. If possible, use Google Earth or allow students to

use Google Earth to explore the area around Blackbird Landing in the Delaware NERR and the area around the State Route 2 site in the Old Woman Creek NERR. Make sure students recognize the location of Blackbird Landing in relation to the ocean and the coast. Also, point out the key features of the Old Woman Creek site where water from the creek mixes with water from Lake Erie.

17. Have students complete Part 5 of the *Student Worksheet—Chemistry in an Estuary*.

### Check for Understanding

1. Ask students to summarize the factors that make estuaries such dynamic sites of transition and change for all the organisms that live within their boundaries.
2. If at all possible, take students to one or more sites on or near your school grounds to measure water quality. Have students measure each of the four water quality factors if possible at each site and record their results. Then have students compare their values for water quality with values taken from each NERR water quality graph on the date of students' observations. How do the parameters differ between your local site(s) and NERR sites? Explain the cause of differences you find.

### Optional Extension Inquiries

1. Have students compare two other sites in Narragansett Bay using an interactiver viewer at <http://omp.gso.uri.edu/ompweb/doee/virtual/sensors.htm>.
  - The Pomham Rocks site is: <http://omp.gso.uri.edu/ompweb/doee/virtual/viewpr1.htm>.
  - The South Prudence site is: <http://omp.gso.uri.edu/ompweb/doee/virtual/viewsp1.htm>.

This interactive viewer allow students to compare the abiotic factors at two sites (Pomham Rocks and South Prudence) as the depth of water is varied. Have students explain what causes the differences in the factors at two sites within the same estuary. This extension would also make a good final assessment activity.
2. Expand the study of factors to other estuary reserves. Use the NERRS tour and let students choose reserves in proximity to their state. Have students graph the highs, lows, and ranges of each factor from each site and then compare and discuss what factors are most important in explaining sudden changes in water quality in estuarine environments.





## Teacher Worksheet with Answers

### Activity 1: Chemistry in an Estuary

1a. What is an estuary?

*Answer:* An estuary is a partially enclosed body of water where two different bodies of water meet and mix e.g. fresh water from rivers or streams meets and mixes with salt water from the ocean or fresh water from rivers or streams meets and mixes with chemically distinct water of a large lake. In estuaries, water levels are affected by lunar or storm-driven tides. A freshwater estuary such as Old Woman Creek occurs when water from an inland source (stream or river) mixes with a much larger body of water such as one of the Great Lakes.

1b. List the types of habitats shown in the “Monitoring Tutorial”

(<http://www.estuaries.gov/estuaries101/ScienceData/Default.aspx?ID=156>) .

*Answer:* Many kinds of habitat are shown—wetlands, mudflats, coastal beaches, river basins, forested areas, and grasslands.

1c. What features do estuaries have in common?

*Answer:* Most estuaries have cyclic changes in salinity, tidal fluctuations, and have regions of sand or other mud-like sediments. Many have a transition area or brackish water between salt and fresh water sources.

1d. List some of the water quality factors that are important in determining the suitability of the water for different species of plants and animals.

*Answer:* Changing salinity caused by incoming and outgoing tides would change water quality during the day. Increasing and then decreasing temperature during the day affects DO, temperature, pH, and salinity of the estuarine system. Over the year, seasonal temperatures, periods of increased precipitation, and increased runoff could cause changes to water quality factors. Others are mentioned in the “Monitoring Tutorial” .

2a. Write down the difference between the maximum and minimum value for each water quality parameter (this number is called the range of values).

*Answer:* Student answers will vary.

2b. What do you think causes the changes in each parameter over the course of one day?

*Answer:* Students may see that temperature changes and tides are probable causal agents in changing water quality factors.

3a. Describe the pattern of change for each parameter

*Answer:* Student answers will vary.

3b. Give a reason to explain what is causing the variation of each parameter over a 24-hour period.

*Answer:* Daily temperature changes, tidal flow, and weather events are all possible agents of change.





3c. Use the graphs to complete the following sentences:

- i. When the temperature of the water in an estuary increases, the pH, DO, and salinity decreases.
- ii. The water in the South Slough estuary is slightly basic on average during this 24-hr period.

4a. Describe the pattern of change of each water quality parameter over the course of a year.

*Answer: Each factor goes through a cycle of seasonal changes.*

4b. Explain what you believe is causing the variation of each parameter over the course of a year.

*Answer: Seasonal changes, weather events, increased precipitation, and others may be mentioned by students.*

5a. Compare the ranges of the water quality parameters at South Slough and Blackbird Landing? Which ranges are about the same? Which ones are different?

*Answer: The pH at Blackbird landing is more acidic on average. Also, since Blackbird Landing is more inland, the salinity of its water is much lower than Charleston Bridge. Water temperature between the two sites is markedly different and the rise and fall of DO at Blackbird Landing is more pronounced than Charleston.*

5b. Compare the time of year for the maximum and minimum pH, dissolved oxygen, salinity and water temperatures at each of the sites. Are they the same or different? Give one reason for any differences between them.

*Answer: The maximum and minimum values of these three sites are different because of climatic variation between the moderate climate of Oregon (mild winters and summers) and the more extreme climate on the east coast (colder winters and warmer summer temperatures). The OWC NERR is freshwater only. The water parameters at OWC are markedly different than either of the other two saltwater estuaries.*

5c. Does the pattern of change for any of the four water quality parameters vary appreciably between sites? If so, explain why the patterns are different.

*Answer: See answer 5b.*

6a. How are the values for your local water parameters different or the same as those from the three NERR estuaries?

*Answer: Student answers will vary.*





## Student Reading—1

### Activity 1: A Tale of Three Estuaries

An estuary is a partially enclosed body of water where two different bodies of water meet and mix e.g. fresh water from rivers or streams meets and mixes with salt water from the ocean or fresh water from rivers or streams meets and mixes with chemically distinct water of a large lake. In estuaries, water levels are affected by lunar or storm-driven tides.

Each estuarine environment is unique and is characterized by a set of biotic and abiotic factors determined by the nature of the physical setting. You will be comparing the water quality factors from estuaries separated by 3,000 miles. One, the South Slough NERR, is in Oregon on the west coast. Second is the Delaware NERR is located on the east coast. The third is the Old Woman Creek NERR, a freshwater estuary located on Lake Erie in Ohio. (A freshwater estuary such as Old Woman Creek occurs when water from an inland source [stream

or river] mixes with a much larger body of water such as one of the Great Lakes.) As you investigate the water chemistry of these estuaries, note the difference in their proximity to the ocean, their physical make-up, and other characteristics that make them dynamic transition zones for life.

#### South Slough National Estuarine Research Reserve

The South Slough NERR contains upland forests, freshwater wetlands and ponds, salt marshes, mud flats, eelgrass meadows and open water habitats. The reserve is located five miles south of Charleston, OR, on the South Slough of the Coos Bay estuary.

The Coos estuary is an example of a drowned river mouth estuary. The formation of such estuaries along



Figure 1. Mudflats in the South Slough NERR



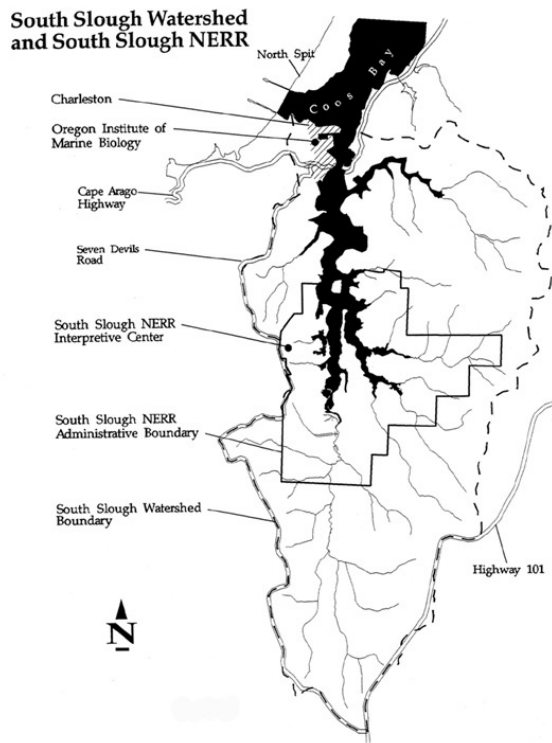


Figure 2. South Slough Watershed and South Slough NERR

the Oregon coast began 20,000 years ago as glaciers melted and sea level began to rise, flooding river valleys.

South Slough is important habitat for many animals, including several that are rare, threatened, or endangered, like the Coho salmon and the western snowy plover. The bald eagle and peregrine falcon, both of which were endangered but are making a comeback, also use the estuary. These species survive at South Slough because of the diverse habitats and plentiful food resources that the estuary provides.

### Delaware National Estuarine Research Reserve

The Delaware NERR consists of two unique components, one on Blackbird Creek and the other on the St. Jones River. The St. Jones Reserve component is located six miles southeast of Dover. The Blackbird Creek component is located in southern New Castle County.


The Blackbird Creek component consists of non-tidal wetlands, tidal freshwater marshes, and tidal brackishwater marshes. Saltmarsh cordgrass and common reed are among the most common wetland plants. The uplands surrounding the marshes are a mixture of shrub and tree species, including both hardwoods and softwoods.

The Blackbird Creek watershed drains a portion of southern New Castle County, Delaware. This is a predominantly rural area, consisting of wetlands, forests and agricultural lands. Blackbird Creek flows into the Delaware River just upstream from Delaware Bay.

The St. Jones River component features tidal brackishwater and saltwater marshes dominated by saltmarsh cordgrass and salt hay. The marshes are bordered by open water habitats of the river and bay and upland habitats like meadows, woodlands, and farmlands.

The St. Jones River watershed drains a portion of the coastal plain in central Kent County, Delaware, including the city of Dover, the surrounding suburbs, industrial areas, agricultural areas and Dover Air Force Base. A dam impounds the upper St. Jones 10.5 miles upstream from the bay to form Silver Lake, a municipal recreation area. Some other headwater streams are also impounded. Much of the eastern portion (bayward) of the watershed consists of wetlands and forests, including lands and waters managed for waterfowl, wild turkey, deer and other wildlife.

### Blackbird Core and Buffer Boundaries



This map was prepared by the Delaware National Estuarine Research Reserve for the Revised Management Plan. The information in this map is subject to change. The information provided is only an approximate geographical representation.

Delaware NERR/Blackbird Creek Component

- Buffer Boundary
- Core Boundary



Figure 3. Delaware NERR, Blackbird Creek Component.

### St. Jones Core and Buffer Boundaries



This map was prepared by the Delaware National Estuarine Research Reserve for the Revised Management Plan. The information in this map is subject to change. The information provided is only an approximate geographical representation.

Delaware NERR/ St. Jones Component

- Buffer Boundary
- Core Boundary



Figure 4. Delaware NERR, St. Jones Component



## Old Woman Creek National Estuarine Research Reserve

Located near Huron, Ohio on the south-central shore of Lake Erie, the Old Woman Creek estuary is the drowned mouth of a small Lake Erie tributary. Since the retreat of mile-thick glaciers from the eastern United States and Canada, the land around the Great Lakes gradually rebounded, causing water levels to rise and flood the mouths of the rivers and streams flowing into them and creating the conditions for freshwater estuaries to develop. Today these estuaries are characterized by:

- drowned river mouths
- areas where stream and lake water meet and mix
- water levels that are regulated by changing lake levels (including wind-driven storm surges and resulting seiche events).

Like water sloshing in a bathtub, seiches are tide-like rises and drops in Great Lakes coastal water levels caused by prolonged strong winds that push water toward one side of the lake, causing the water level to rise on the downwind side of the lake and to drop on the upwind side. When the wind stops, the water sloshes back and forth, with the near-shore water level rising and falling in decreasingly small amounts on both sides of the lake until it reaches equilibrium. In large bodies of water such as Lake Erie, the magnitude and timing of the seiches cause them to affect the coast much like lunar tides.

A barrier beach formed by waves and other forces within the lake isolates the estuary from the Lake Erie proper for extended periods. The barrier is normally opened by storm runoff from the watershed, but occasionally Lake Erie storm surges spill over the bar and into the estuary.

Like salt marshes, the emergent wetland plant communities of freshwater estuaries are among the most biologically productive areas on earth. Old Woman Creek NERR contains a variety of habitats including marshes and swamps, upland forests, open waters, bays and mudflats, tributary streams, a barrier beach and near shore Lake Erie. The estuary and surrounding environment



Figure 5. Barrier beach closed



Figure 6. Barrier beach open

support over 40 species of fish at some time during their life cycles, serve as a way station for over 300 species of migratory birds, and provide habitat for many species of mammals, reptiles, and amphibians.

Old Woman Creek flows 15 miles through portions of Huron and Erie counties including Townsend, Berlin and neighboring townships and the Village of Berlin Heights before entering Lake Erie 3 miles east of the city of Huron. Over 67% of the land within the creek’s 27 square mile watershed is used for agriculture and the population is approximately 3,200. Although the estuary

has remained relatively undisturbed, water quality is still negatively impacted by siltation, habitat alteration, and organic and nutrient enrichment stemming from agriculture and other land uses.



Figure 7. Old Woman Creek estuary photo (Credit: Gene Wright)

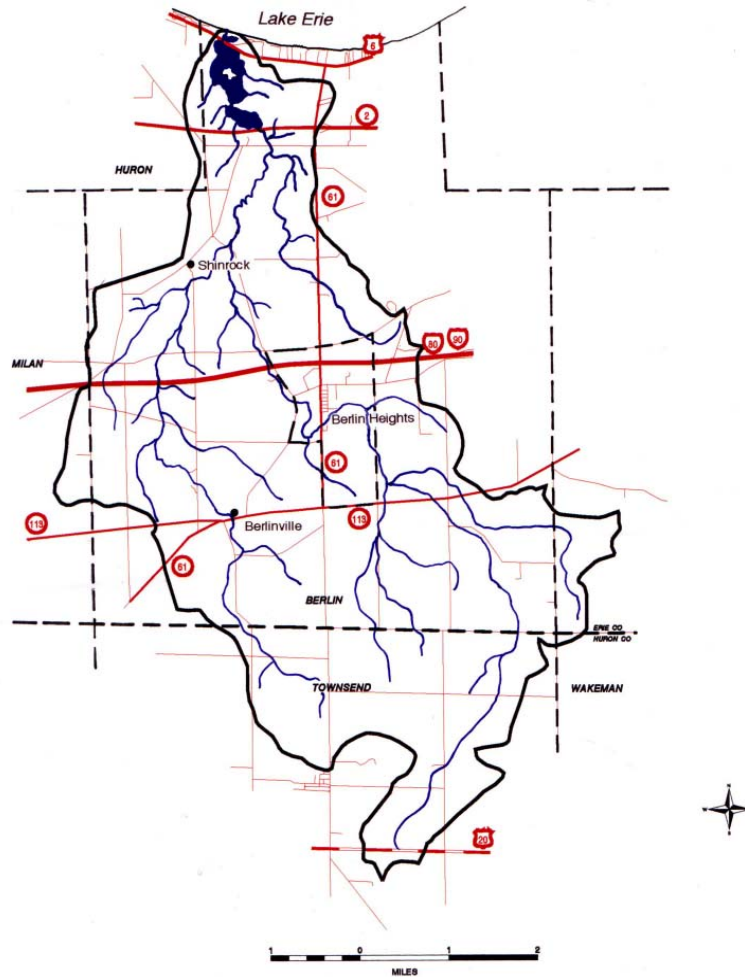


Figure 8. Old Woman Creek NERR, Ohio



## Student Reading – 2

### Activity 1: Chemistry in an Estuary

Estuaries are partially enclosed body of water and surrounding coastal habitats, where saltwater from the ocean mixes with fresh water from rivers, streams, or groundwater and where water levels are affected by lunar tides. In Great Lakes estuaries, fresh water from rivers or streams mixes with the chemically-distinct fresh water of the Great Lakes and water levels are influenced by wind-driven rather than lunar tides.

In fresh water, the concentration of salts, or salinity, is nearly zero. The salinity of water in the ocean averages about 35 parts per thousand (ppt). The mixture of seawater and fresh water in estuaries is called brackish water.

Estuaries are transitional areas that connect the land and the sea, or areas in which a source of fresh water such as a stream or river flows into a much larger body of water like one of the Great Lakes. The daily tides (the regular rise and fall of the sea's surface) are a major influence on many of these dynamic environments. Most areas of the Earth experience two high and two low tides each day. Some areas, like the Gulf of Mexico, have only one high and one low tide each day. In enclosed, non-marine location such as Lake Superior, the change in water levels due to lunar tides is measured in centimeters instead of meters. Although the lunar-driven tide is small on the Great Lakes, estuaries there are influenced by changes in water level resulting from wind-driven storm surges and resulting seiches.

Like water sloshing in a bathtub, seiches are tide-like rises and drops in Great Lakes coastal water levels caused by prolonged strong winds that push water toward one side of the lake, causing the water level to rise on the downwind side of the lake and to drop on the upwind side. When the wind stops, the water sloshes back and forth, with the near shore water level

rising and falling in decreasingly small amounts on both sides of the lake until it reaches equilibrium.

The tidal pattern in an estuary depends on its geographic location, the shape of the coastline and ocean floor, the depth of the water, local winds, and any restrictions to water flow. For example, the Bay of Fundy, which is located off the northern coast of Maine extending up to Canada, can be found at the end of a long, narrow inlet. In this Bay, tides are heightened because a large volume of water is being forced into a very small space. The tide there is in excess of 40 feet!

While strongly affected by tides and tidal cycles, many estuaries are protected from the full force of ocean waves, winds, and storms by reefs, barrier islands, or fingers of land, mud, or sand that surround them. The characteristics of each estuary depend upon the local climate, freshwater input, tidal patterns, and currents. Truly, no two estuaries are the same.

Monitoring the environment of an estuary by measuring critical factors such as pH, dissolved oxygen, salinity, and temperature is vital to ensure that animals and plants thrive. It is important to know what these parameters are measuring.

#### pH

Scientists use pH as an indicator of whether water is acidic or basic. pH is measured on a scale of 1 to 14, where numbers less than 7 are increasingly acidic and numbers greater than 7 are increasingly basic. Distilled water has a pH of 7 and is said to be neutral. Water on the surface of Earth is usually a little acidic or basic due to both geological and biological influences.



pH is actually a measure of the amount of hydrogen ions in solution. In fact, some people think of pH as being the “power of hydrogen”. A lower pH indicates that there are more free hydrogen ions, which creates acidic conditions, and a higher pH indicates there are fewer free hydrogen ions, which creates basic conditions. pH is equal to the negative logarithm of the hydrogen ion activity, meaning that the hydrogen ion concentration changes tenfold for each number change in pH unit.

All aquatic organisms have a pH range to which they are adapted. Outside of this range, critical biological processes may be disrupted, leading to stress and death. Most organisms cannot live below a pH of 5 or above a pH of 9. Additionally, pH is used to monitor safe water conditions. Once the background range of pH has been established, a rise or fall in pH may indicate the release of a chemical pollutant or an increase in acid rain. Additionally, pH affects the solubility, biological availability, and toxicity of many substances. For example, most metals are more soluble, and often more toxic, at lower pH values.

## Temperature

Temperature is a measure of kinetic energy, or energy of motion. Increasing water temperature indicates increasing energy, or motion of water molecules and substances dissolved in the water. Temperature is a critical factor for survival in any environment. Organisms that live in water are particularly sensitive to sudden changes in temperature.

The Celsius temperature scale is used worldwide to measure temperature. Temperature has a significant impact on water density. Water density is greatest at 4 degrees Celsius, meaning that water at higher or lower temperatures will float on top of water at or near 4 ° C. This is why ice floats on water, and warm water floats over cooler water. Differences in water temperature can cause the formation of distinct, non-mixing layers in water, otherwise known as stratification. This stratification leads to chemically and biologically different regions in water.

## Salinity and Conductivity

Salinity and conductivity are measures of the dissolved salts in water. Salinity is usually described using units of parts per thousand or ppt. A salinity of 20 ppt means that there are 20 grams of salt in each 1000 grams of water. Because it is impractical to routinely determine the total amount of salts dissolved in water, a surrogate measure—the ability of the water to conduct electricity—is made for determining both conductivity and salinity.

Salinity and conductivity are closely related. Pure water is a very poor conductor of electrical current, but salts dissolved in the water are in ionic (charged) form and conduct electrical current. Conductivity, which is the opposite of resistance, measures the ability of water to conduct current. A higher conductivity indicates less resistance, and means that electrical current can flow more easily through the solution. Because dissolved salts conduct current, conductivity increases as salinity increases. Common salts in water that conduct electrical current include sodium, chloride, calcium, and magnesium.

All aquatic life in an estuary must be able to survive changes in salinity. All plants and animals have a range of salinity to which they are adapted. Outside of this range, they will be unable to function and may die. Salinity affects the ability of water to hold oxygen, and seawater holds approximately 20% less oxygen than freshwater. Many chemical reactions that determine the concentration of nutrients and metals in the water are influenced by salinity. The conductivity and salinity of seawater is very high while these parameters are comparatively low in tributaries and rivers. Freshwater lakes typically have conductivities and salinities even lower than those of inland streams. This is because inland streams pick up salts from rocks, soils, and roads as they flow over the landscape.

Many chemical reactions that determine the concentration of nutrients and metals in the water are influenced by salinity. For instance, salinity and conductivity affect the ability of particles to flocculate, or stick together, which is important in determining turbidity levels and sedimentation rates. Salinity also





increases the density of water, with seawater being heavier than freshwater. This density difference inhibits mixing. In fact, conductivity and salinity serve as excellent indicators of mixing between inland water and sea or lake water, and they are particularly useful in indicating pollution events or trends in freshwater. For example, an overdose of fertilizers or the application of road salt will cause spikes in conductivity and salinity.

Conductivity and salinity are dependent on many factors, including geology, precipitation, surface runoff and evaporation. Since conductivity is a much more sensitive measurement than salinity, it is more impacted by changes in temperature. Conductivity increases as water temperature increases because water becomes less viscous and ions can move more easily at higher temperatures. Because of this, most reports of conductivity reference specific conductivity. Specific conductivity adjusts the conductivity reading to what it would be if the water was 25°C. This is important for comparing conductivities from waters with different temperatures.

## Dissolved Oxygen

Dissolved oxygen (DO) is the amount of oxygen gas that is dissolved in a sample of water. DO is usually measured in units of milligrams per liter (mg/L). Just as we need air to breathe, aquatic plants and animals need dissolved oxygen to live. Dissolved oxygen is used for respiration, which is the process by which organisms gain energy by breaking down carbon compounds, such as sugars. Dissolved oxygen is also essential for decomposition, which is a type of respiration in which bacteria break down organic materials for energy. Decomposition is an important process that recycles nutrients and removes organic materials such as dead vegetation from our waterways. Because dissolved oxygen is required for aquatic life, balancing the sources and sinks of dissolved oxygen is essential in maintaining a healthy ecosystem.

The concentration of dissolved oxygen in water depends on a number of interrelated factors, including biological factors, such as the rates of photosynthesis and respiration, and physical and chemical factors, such as temperature, salinity, and air pressure.

Dissolved oxygen enters the water by diffusion from the air and as a byproduct of photosynthesis. Diffusion from the air occurs very quickly in turbulent, shallow water or under windy conditions.

The amount of oxygen that can dissolve in water depends on water temperature, salinity, and air pressure. As temperature and salinity increase, and pressure decreases, the amount of oxygen that can be dissolved in water decreases. Cold water holds more dissolved oxygen than warm water, and water at sea level holds more dissolved oxygen than water at high altitudes. Seawater holds approximately 20% less oxygen than freshwater at the same temperature and altitude.





## Student Worksheet

### Activity 1: Chemistry in an Estuary

Student Name: \_\_\_\_\_

#### Part 1 — What is an Estuary?

As you are shown various images in the *Monitoring Tutorial*, take notes on the nature of estuaries and record any ideas you have about what factors would cause changes in water quality in an estuary over the course of a day, a season or a year.

1a. What is an estuary?

1b. List the types of habitats shown in the *Monitoring Tutorial*.

1c. What features do estuaries have in common?

1d. List some of the water quality parameters that are important in determining the suitability of the water for different species of plants and animals.



## Part 2 — Investigating Water Quality in an Estuary

You will study four of the water quality parameters in the South Slough NERR in Oregon. You will look at how pH, dissolved oxygen, salinity, and water temperature are measured by one of the four monitoring stations comprising the estuary reserve—Charleston Bridge.

Look at the satellite image below to see the location of the site and its general position with respect to the ocean. If time permits, investigate this area more fully by using Google Earth.

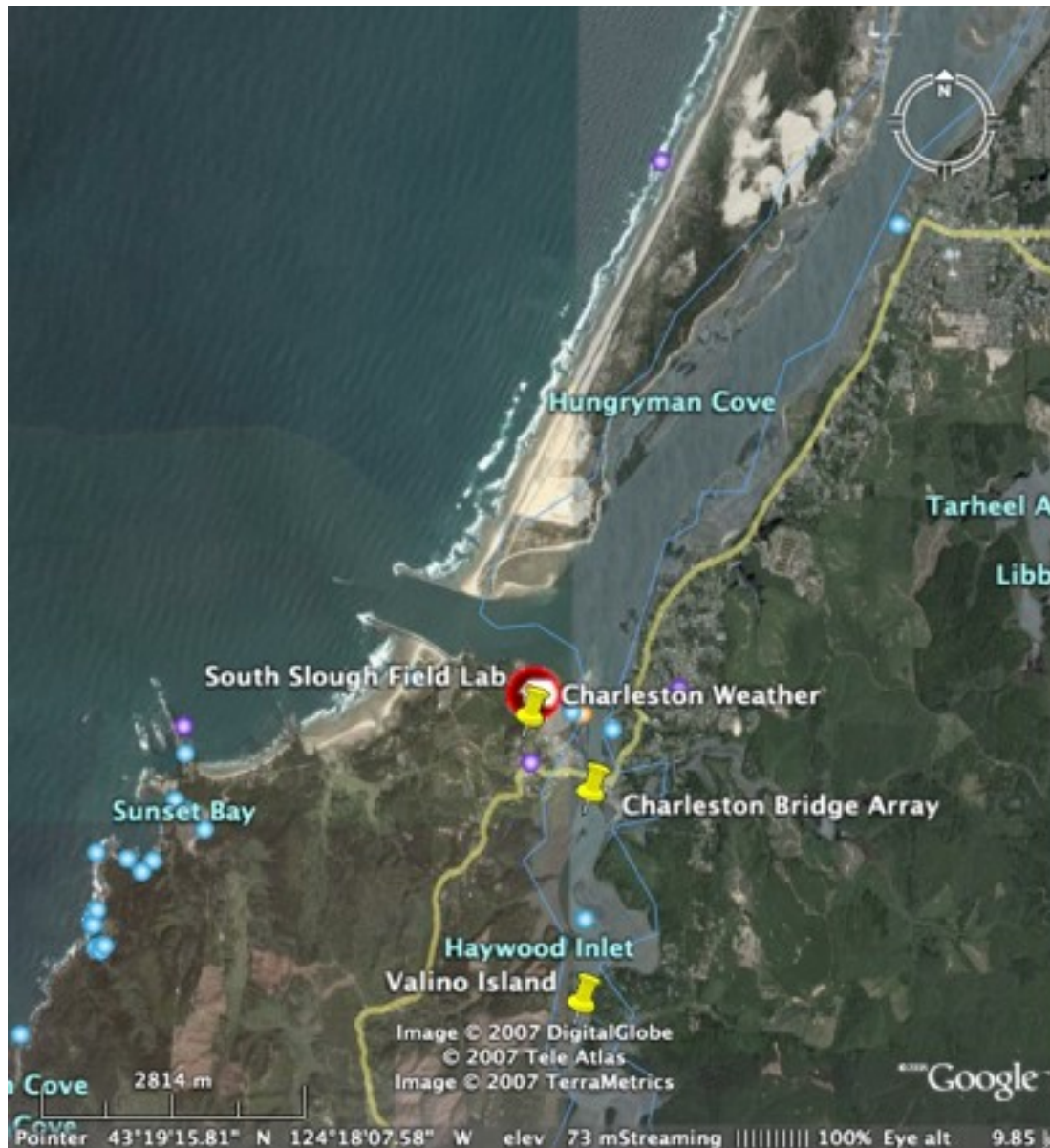


Figure 9. South Slough NERR with monitoring stations.

Study the sets of gauge data (Gauge Data for 9/5/07 at 11 AM EDT—Charleston Bridge) from the *Student Data Sheet—Chemistry in an Estuary*.

2a. Write down the difference between the maximum and minimum value for each water quality parameter (this number is called the range of values).

2b. What do you think causes the changes in each parameter over the course of one day?

### Part 3 — Investigating Water Quality Over a Day

You will now study the same water quality parameters over a 24-hour period using a graphical display. Each graph (Graphical Data: Midnight 9/4 to 11 AM 9/5/07—South Slough, OR—Charleston Bridge) from the *Student Data Sheet* begins at midnight on Sept. 4 and ends at 11 AM on Sept. 5.

3a. Describe the pattern of change for each parameter.

3b. Give a reason to explain what is causing the variation of each parameter over a 24-hour period.



3c. Use the graphs to complete the following sentences:

- i. When the temperature of the water in an estuary increases, the \_\_\_\_\_ decreases.
- ii. The water in the South Slough estuary is slightly \_\_\_\_\_ (acidic or basic) on average during this 24-hour period.

## Part 4 — Investigating Water Quality Over a Year

Now you will study the same four parameters as they vary over an entire calendar year, using the graphs (Graphical Data for the year 2006—South Slough, OR—Charleston Bridge) from the *Student Data Sheet*.

Compute the range for each water quality parameter for each site over the course of a year (high value - low value).

4a. Describe the pattern of change of each water quality factor over the course of a year.



4b. Explain what you believe is causing the variation of each factor over the course of a year.

### Part 5 — Comparing Water Quality Data Between Three Different Estuarine Environments

You will now compare the ranges of water quality factors for South Slough, OR with two very different estuaries—Blackbird Landing, a monitoring station in the Delaware NERR, and Lower Estuary, a monitoring station in Old Woman Creek, Ohio, the only freshwater estuary in the National Estuarine Research Reserve System.



Figure 10. The Delaware NERR showing the location of Blackbird Landing



Figure 11. Aerial image of Old Woman Creek NERR showing the location of the Lower Estuary monitoring station

Study the 2006 data graphs (Graphical Data for the year 2006—Old Woman Creek, OH) from the *Student Data Sheet* and compute the yearly ranges for each of the four parameters.

Then study the 2006 data graphs for the Lower Estuary monitoring station in the Old Woman Creek NERR and compute the yearly ranges for each of the four parameters.

- 5a. Compare the ranges of the water quality parameters between the three sites: South Slough, Blackbird Landing, and Old Woman Creek Lower Estuary. Which parameter ranges are about the same? Which ones are different?

5b. Compare the time of year for the maximum and minimum pH, dissolved oxygen, salinity and water temperatures at each of the sites. Are they the same or different? Give one reason for any differences between them.

5c. Does the pattern of change for any of the four water quality factors vary appreciably between sites? If so, explain why the patterns are different.







# Student Data Sheet

## Activity 1: Chemistry in an Estuary

### Part 2 — Investigating Water Quality in an Estuary

Gauge Data for 9/5/07 at 11 AM EDT — Charleston Bridge




Figure 12. Gauge Data for 9/05/07 at 11 AM EDT—Charleston, Bridge

### Part 3 — Investigating Water Quality Over a Day

Graphical Data: Midnight 9/4 to 11 AM 9/5/07—South Slough, OR—Charleston Bridge

NOTE: The vertical and horizontal scales differ somewhat from graph to graph.

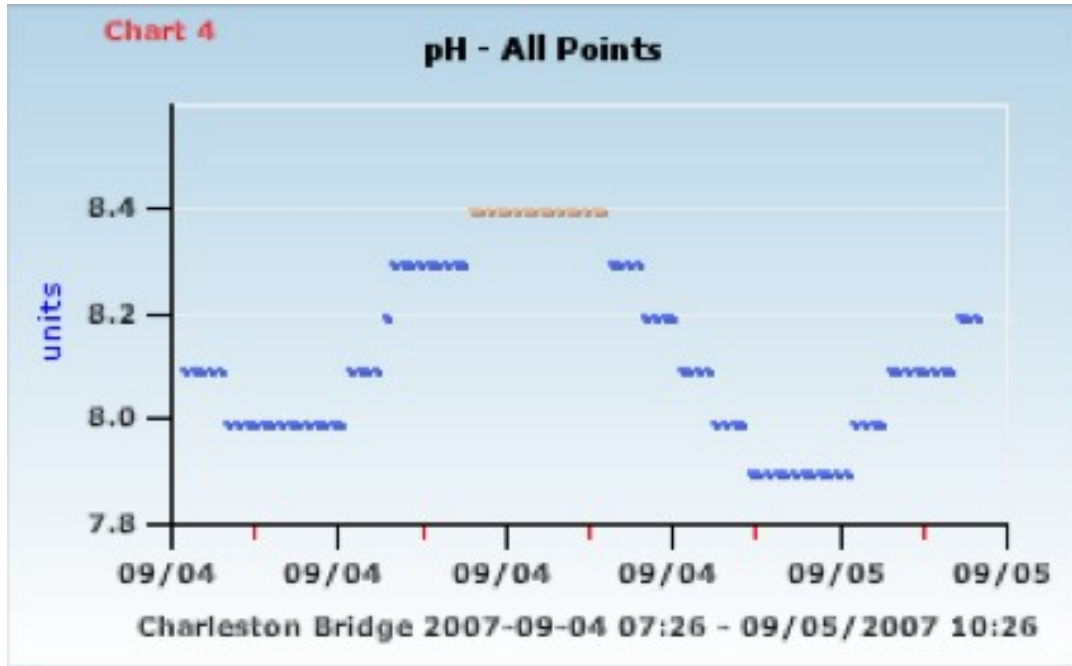


Figure 13. Daily pH: South Slough, OR—Charleston Bridge

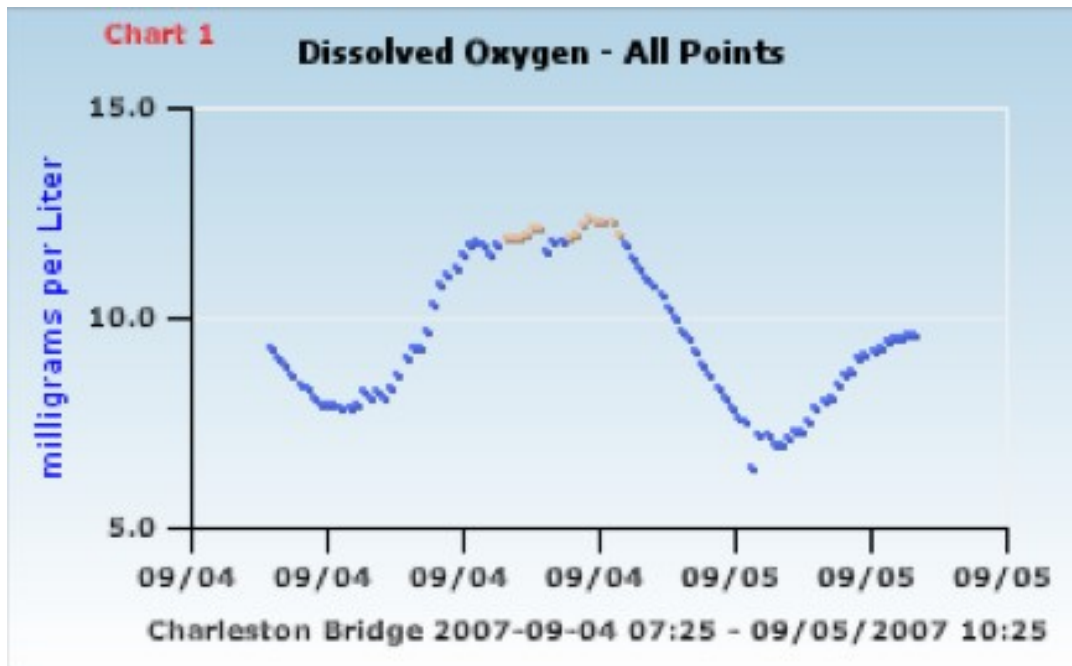


Figure 14. Daily DO: South Slough, OR—Charleston Bridge



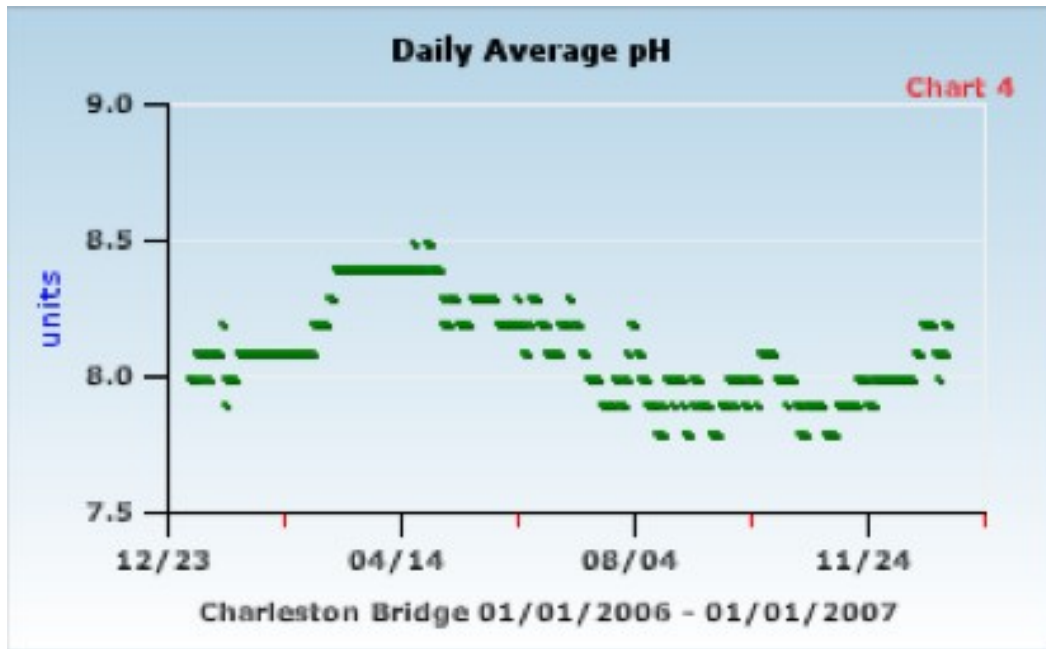


Figure 17. Annual pH: South Slough, OR—Charleston Bridge

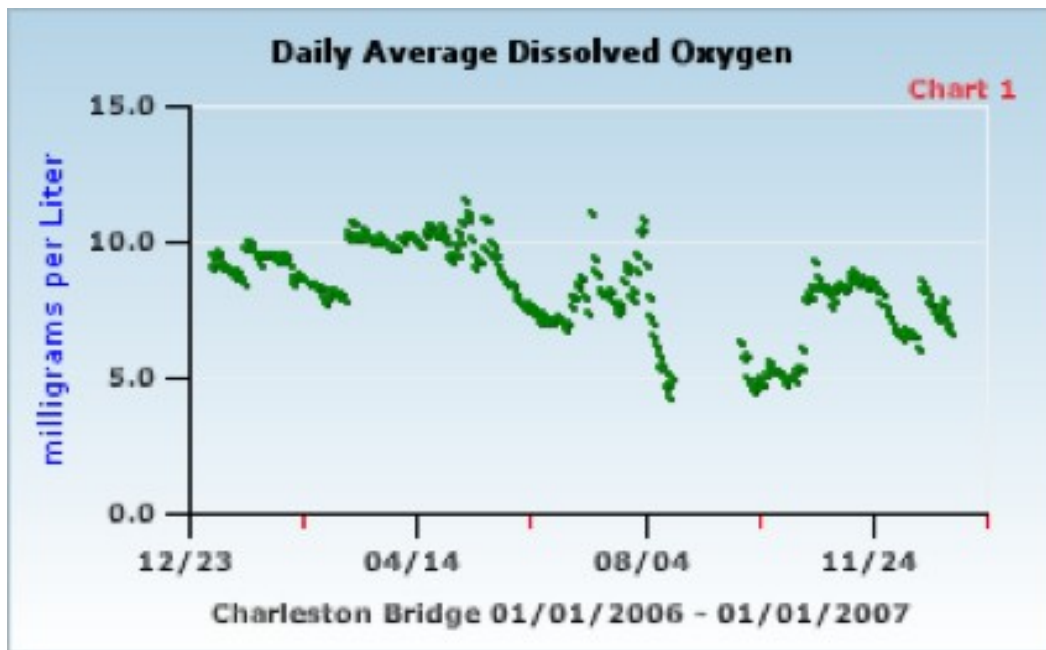


Figure 18. Annual DO: South Slough, OR—Charleston Bridge

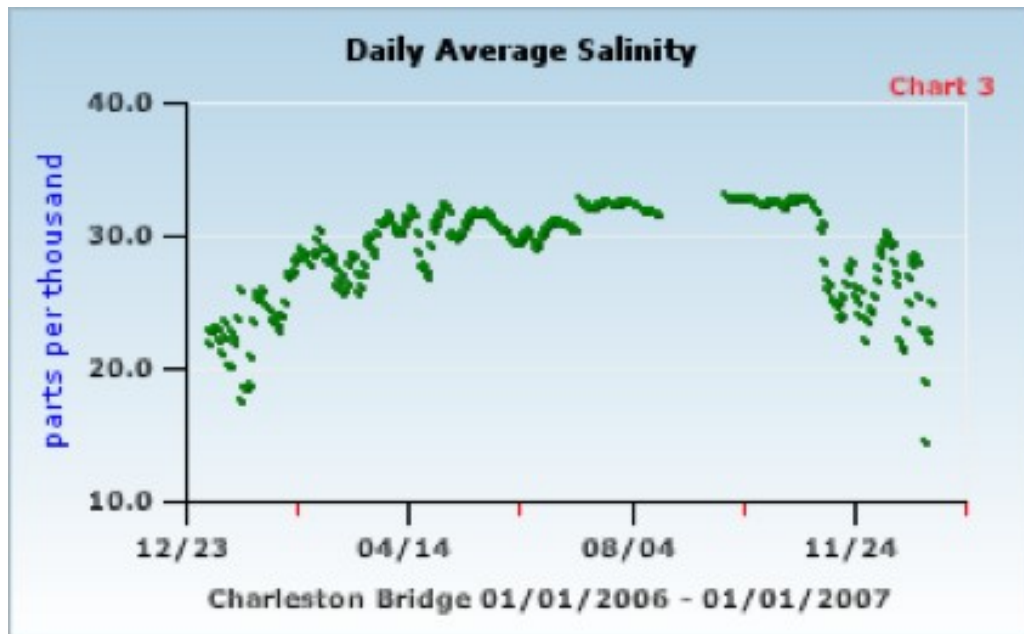


Figure 19. Annual Salinity: South Slough, OR—Charleston Bridge

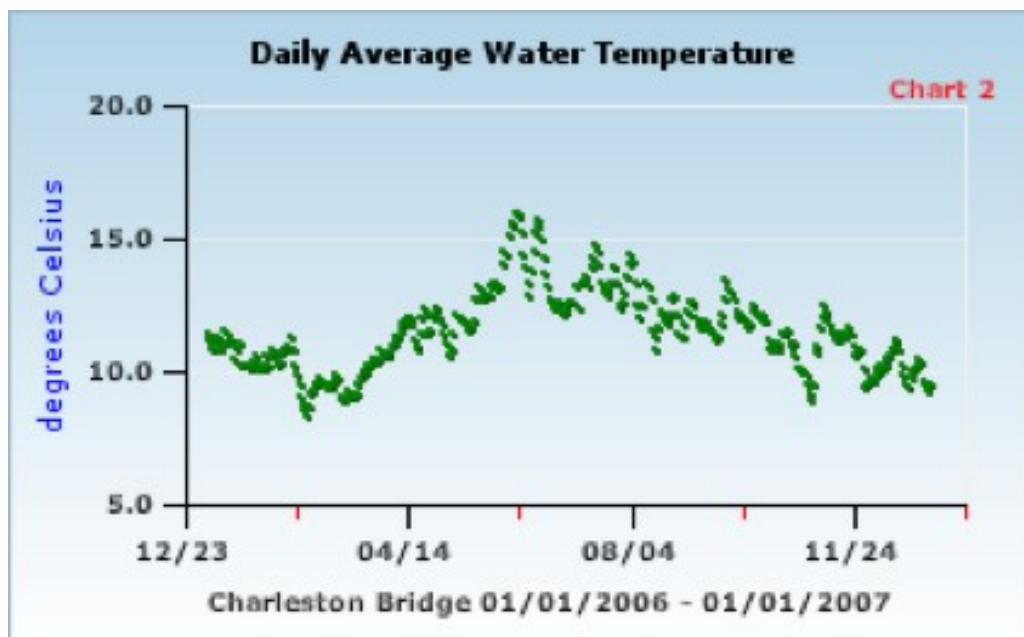


Figure 20. Annual Water Temperature: South Slough, OR—Charleston Bridge

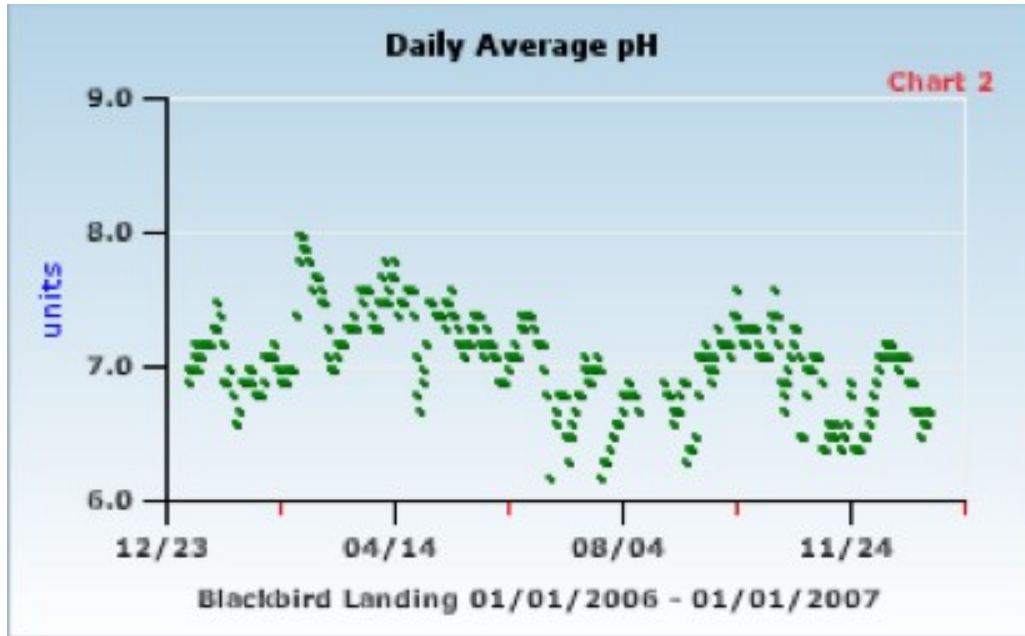


Figure 21. Annual pH: Blackbird Landing, DE

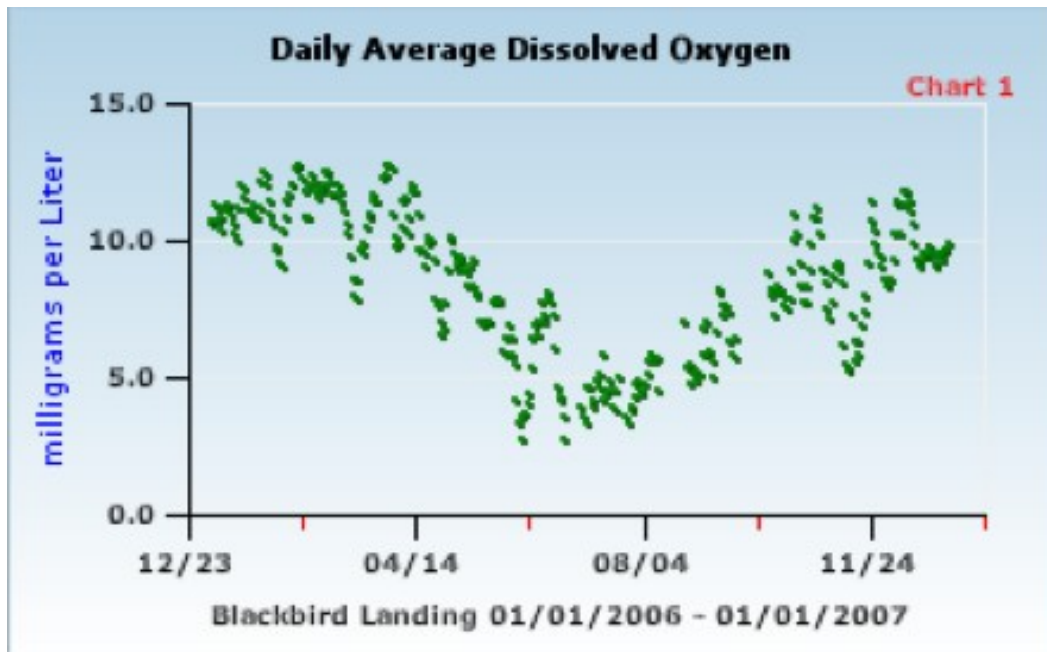


Figure 22 Annual DO: Blackbird Landing, DE

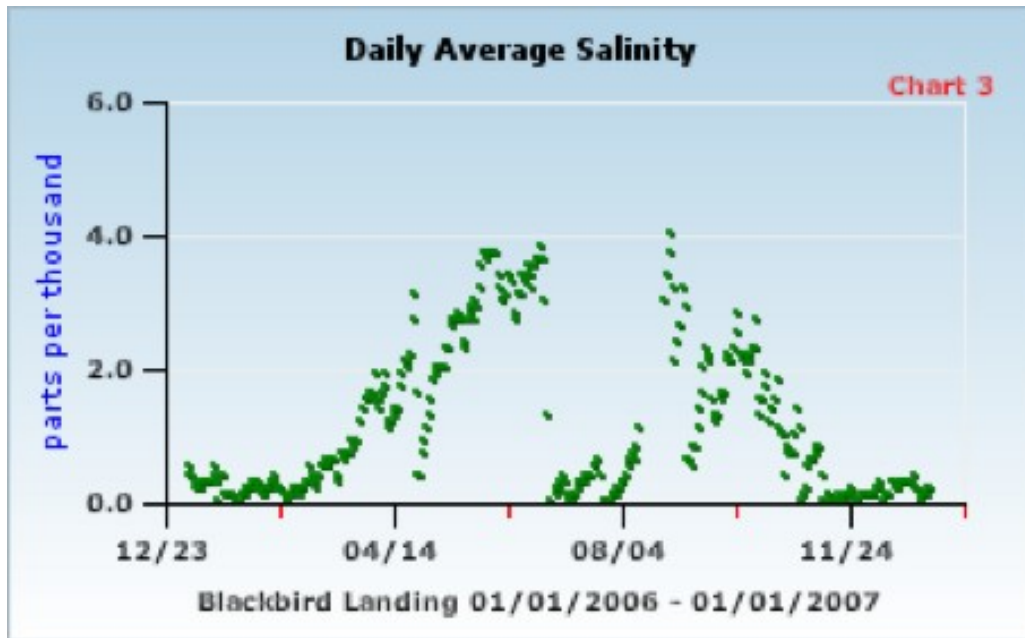


Figure 23. Annual Salinity: Blackbird Landing, DE

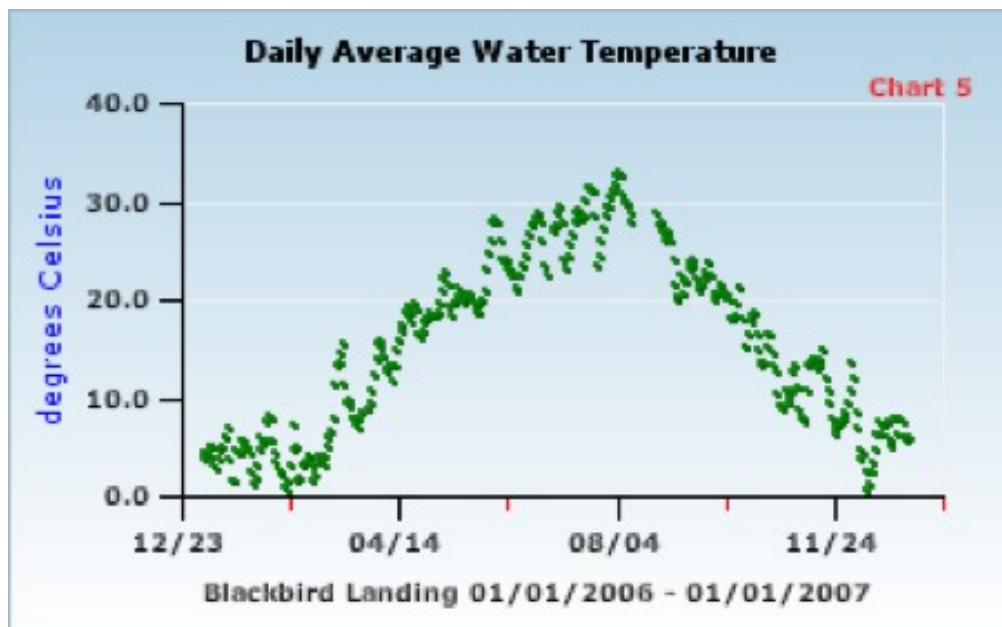


Figure 24. Annual Water Temperature: Blackbird Landing, DE

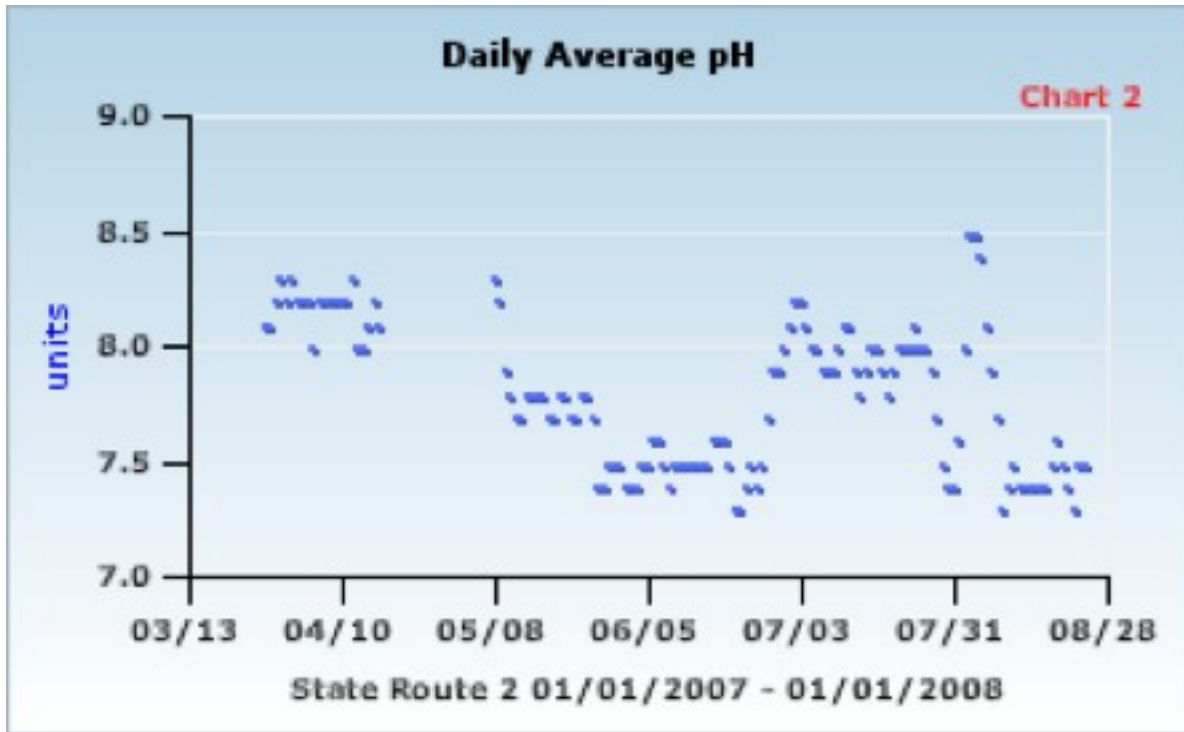


Figure 25. Annual pH: Old Woman Creek, OH—Lower Estuary

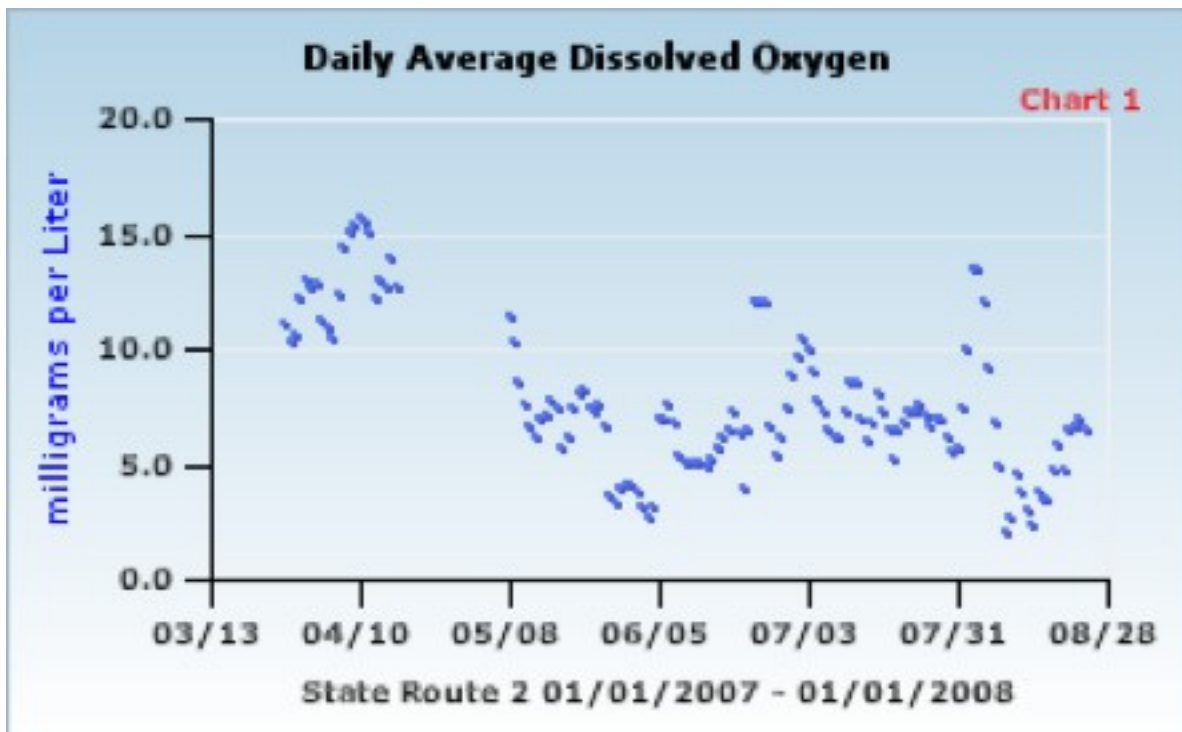


Figure 26. Annual DO: Old Woman Creek, OH—Lower Estuary



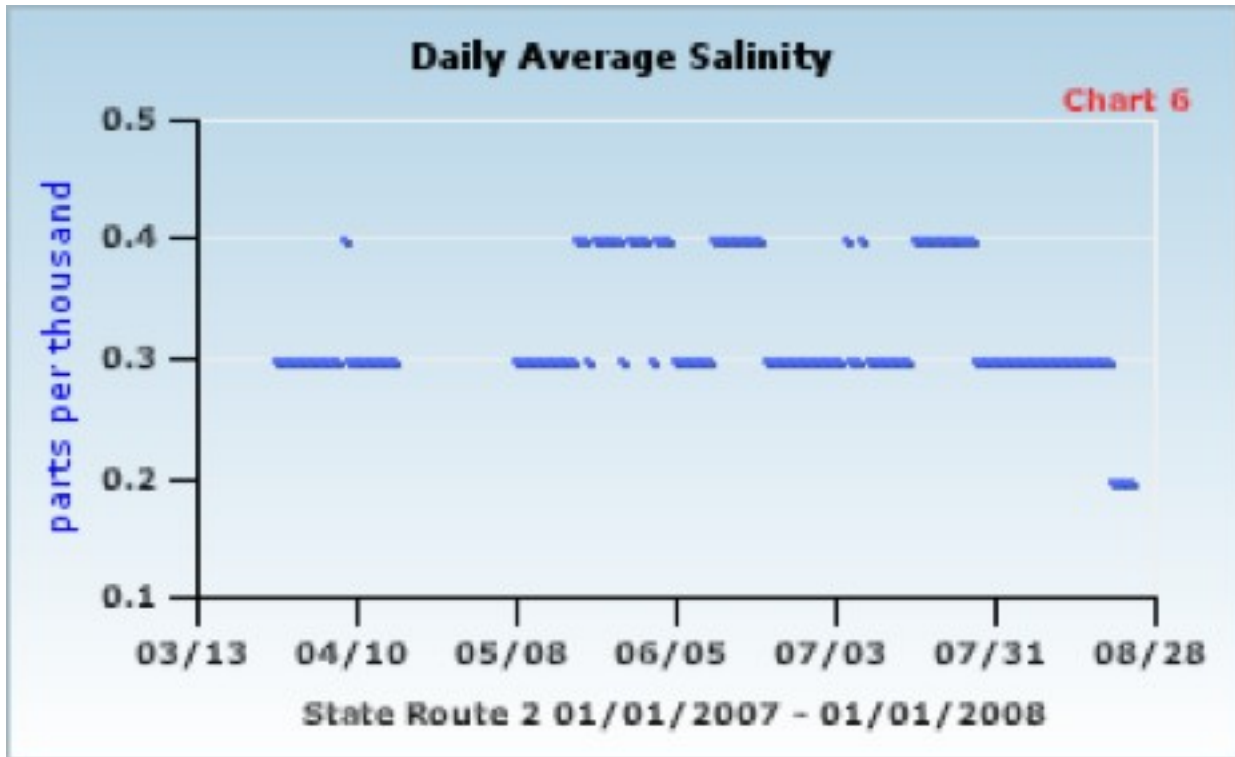


Figure 27. Annual Salinity: Old Woman Creek, OH—Lower Estuary

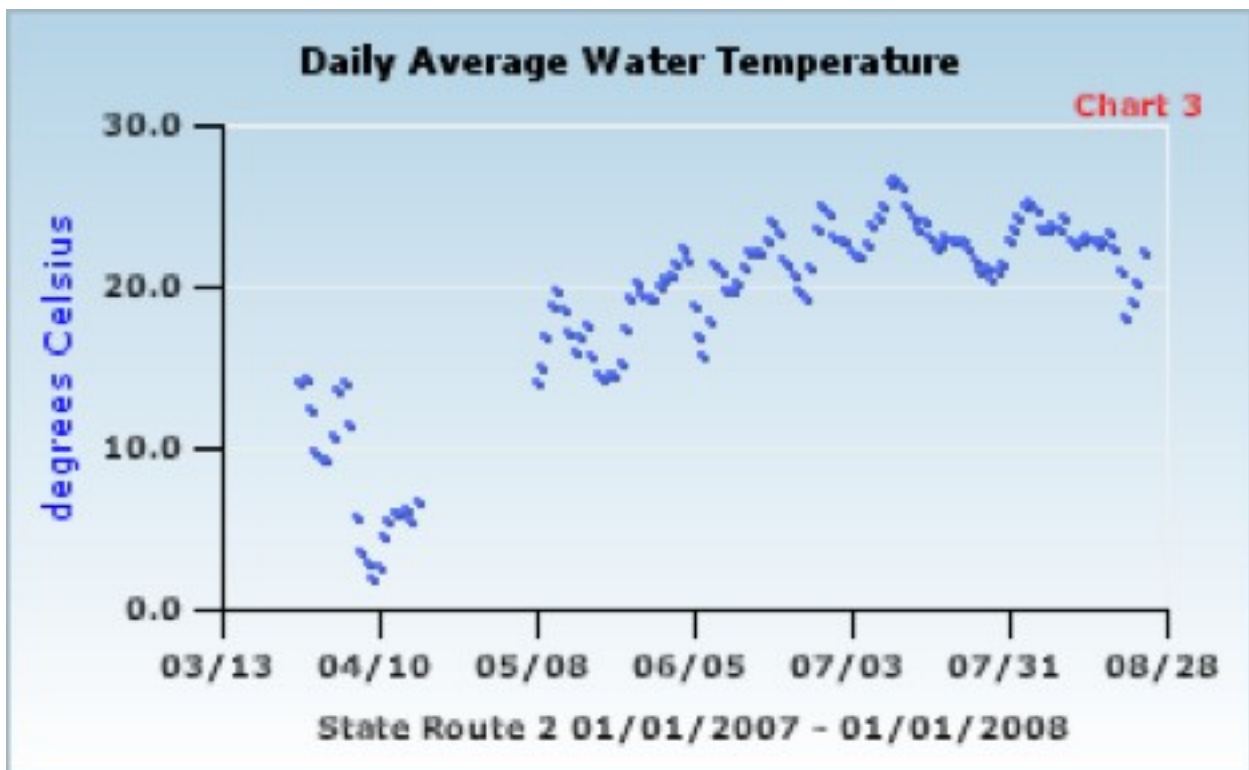


Figure 28. Annual Water Temperature: Old Woman Creek, OH—Lower Estuary